

Name _____

(Draw a 8-centimeter line segment for your name.)

Homework SR #12

Date _____

Day of the Week _____

Tally
Marks

- Write the number one hundred thirty-two on the place value chart.

Hundreds	Tens	Ones

What digit is in the hundreds place? _____

- Eliza had 10 books in her room. There were seven books on the shelf and some books on the table. How many books were on the table?

Number sentence _____

Answer _____ books on the table.

- Fill in the missing addend to make the equations equal.

$8 + \square = 15$

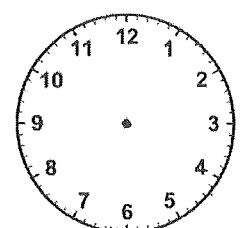
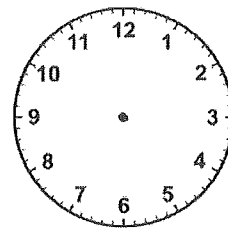


$3 + \square = 10$

$\square + 6 = 11$

$\square + 9 = 12$

- Write the time below the clocks.

- Show the times on both clocks.



:

:

half past eight

:

ten fifteen

:

- Find the sums.

$$\begin{array}{r} 13 \\ +45 \\ \hline \end{array}$$

$$\begin{array}{r} 38 \\ +44 \\ \hline \end{array}$$

$$\begin{array}{r} 51 \\ +38 \\ \hline \end{array}$$

$$\begin{array}{r} 66 \\ +16 \\ \hline \end{array}$$

$$\begin{array}{r} 23 \\ +59 \\ \hline \end{array}$$

$$\begin{array}{r} 0 \\ + 1 \\ \hline \end{array}$$

$$\begin{array}{r} 5 \\ + 0 \\ \hline \end{array}$$

$$\begin{array}{r} 9 \\ - 1 \\ \hline \end{array}$$

$$\begin{array}{r} 0 \\ + 7 \\ \hline \end{array}$$

$$\begin{array}{r} 15 \\ - 8 \\ \hline \end{array}$$

$$\begin{array}{r} 15 \\ - 6 \\ \hline \end{array}$$

$$\begin{array}{r} 7 \\ - 1 \\ \hline \end{array}$$

$$\begin{array}{r} 9 \\ + 7 \\ \hline \end{array}$$

$$\begin{array}{r} 6 \\ - 4 \\ \hline \end{array}$$

$$\begin{array}{r} 8 \\ + 9 \\ \hline \end{array}$$

$$\begin{array}{r} 9 \\ + 0 \\ \hline \end{array}$$

$$\begin{array}{r} 9 \\ + 2 \\ \hline \end{array}$$

$$\begin{array}{r} 0 \\ + 9 \\ \hline \end{array}$$

$$\begin{array}{r} 3 \\ + 5 \\ \hline \end{array}$$

$$\begin{array}{r} 5 \\ - 5 \\ \hline \end{array}$$

$$\begin{array}{r} 3 \\ + 2 \\ \hline \end{array}$$

$$\begin{array}{r} 10 \\ - 2 \\ \hline \end{array}$$

$$\begin{array}{r} 10 \\ - 1 \\ \hline \end{array}$$

$$\begin{array}{r} 7 \\ + 3 \\ \hline \end{array}$$

$$\begin{array}{r} 14 \\ - 9 \\ \hline \end{array}$$

$$\begin{array}{r} 3 \\ - 3 \\ \hline \end{array}$$

$$\begin{array}{r} 9 \\ + 6 \\ \hline \end{array}$$

$$\begin{array}{r} 1 \\ + 8 \\ \hline \end{array}$$

$$\begin{array}{r} 9 \\ + 5 \\ \hline \end{array}$$

$$\begin{array}{r} 6 \\ + 0 \\ \hline \end{array}$$

Ask someone at home to correct your paper.

Corrected by _____