

Name \_\_\_\_\_

(Draw a 2-inch line segment for your name.)

# Homework

SR #10

Date \_\_\_\_\_

Day of the Week \_\_\_\_\_

Tally  
Marks

- Write the number one hundred thirty on the place value chart.

What digit is in the tens' place? \_\_\_\_\_

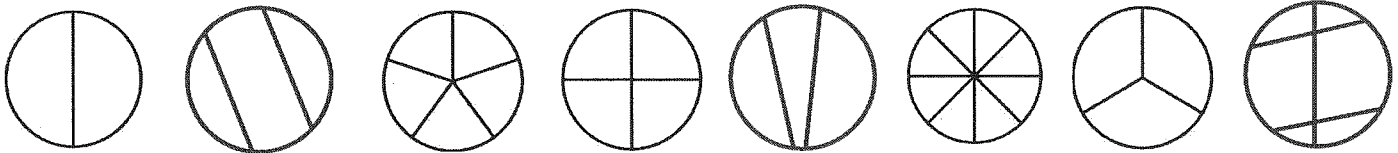
Hundreds	Tens	Ones

- There were five sheep in the barn, three sheep in the pasture, and two sheep by the stream. How many sheep were there altogether?





Number sentence \_\_\_\_\_

Answer \_\_\_\_\_ sheep

- Color the shapes that have equal parts.



- Write the correct time below the clocks.



- Find the answers.

$$\begin{array}{r} 39 \\ - 17 \\ \hline \end{array}$$

$$\begin{array}{r} 66 \\ - 28 \\ \hline \end{array}$$

$$\begin{array}{r} 61 \\ - 43 \\ \hline \end{array}$$

$$\begin{array}{r} 29 \\ - 9 \\ \hline \end{array}$$

$$\begin{array}{r} 43 \\ - 21 \\ \hline \end{array}$$

$$\begin{array}{r} 75 \\ - 36 \\ \hline \end{array}$$

$$\begin{array}{r} 56 \\ - 14 \\ \hline \end{array}$$

$$\begin{array}{r} 55 \\ + 64 \\ \hline \end{array}$$

$$\begin{array}{r} 25 \\ + 38 \\ \hline \end{array}$$

$$\begin{array}{r} 12 \\ + 18 \\ \hline \end{array}$$

$$\begin{array}{r} 27 \\ + 27 \\ \hline \end{array}$$

$$\begin{array}{r} 34 \\ + 39 \\ \hline \end{array}$$

$$\begin{array}{r} 73 \\ + 18 \\ \hline \end{array}$$

$$\begin{array}{r} 48 \\ + 36 \\ \hline \end{array}$$

$$\begin{array}{r} 23 \\ + 26 \\ \hline \end{array}$$

$$\begin{array}{r} 79 \\ + 14 \\ \hline \end{array}$$

Ask someone at home to correct your paper.

Corrected by \_\_\_\_\_