

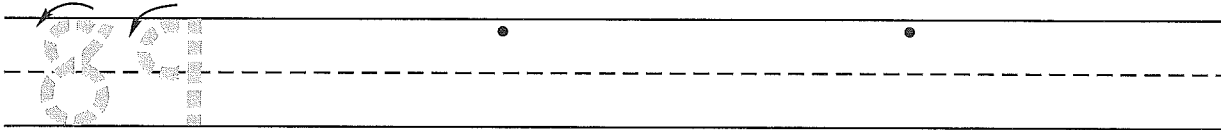
Name _____
 (Draw a 2-inch line segment for your name.)

Date _____


Day of the Week _____

Tally marks

1. Write the number eighty-nine 2 more times. How many digits are on the line? _____




2. Danielle made six bookmarks. She gave two to Michael. Draw a picture and write a number sentence to show how many bookmarks she has now.



Number sentence _____

Answer _____ bookmarks

3. How much money is this? _____



4. Measure this line segment using inches. _____ inches

5. Put these number cards in order from least to greatest.

24	32	16	27				
				least			greatest

6. Choose 5 numbers on the hundred number chart. Add 10 to each number.

\bigcirc	\bigcirc	\bigcirc	\bigcirc	\bigcirc
+ 10	+ 10	+ 10	+ 10	+ 10
□	□	□	□	□

Name _____

1. Finish these number patterns.

5, 10, 15, _____, _____, _____, _____, _____, _____


35, 36, 37, _____, _____, _____, _____, _____, _____

2. Craig made nine bookmarks. He gave two bookmarks to Stephanie. Draw a picture and write a number sentence to show how many bookmarks he has now.

Number sentence _____

Answer _____ bookmarks

3. How much money is this? _____



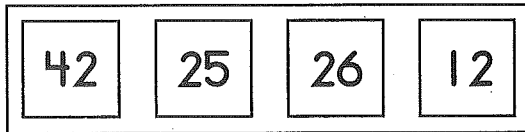
4. Write the answers.

$3 + 7 =$ _____

$8 + 9 =$ _____

$6 + 5 =$ _____

5. Put these number cards in order from least to greatest.



least



greatest

6. Add 10 to each number.

83

16

39

$$\begin{array}{r} 19\text{¢} \\ + 10\text{¢} \\ \hline \end{array}$$

$$\begin{array}{r} 6\text{¢} \\ + 10\text{¢} \\ \hline \end{array}$$

$$\begin{array}{r} 25\text{¢} \\ + 10\text{¢} \\ \hline \end{array}$$