

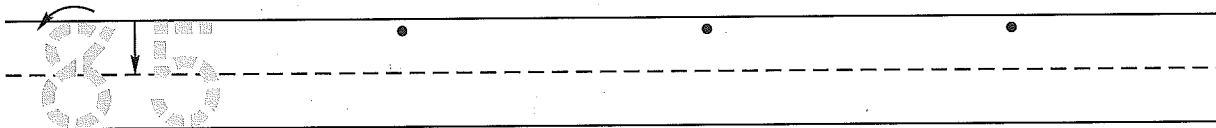
Name \_\_\_\_\_  
 (Draw a line segment for your name.)

Date \_\_\_\_\_


Tally  
marks

Day of the Week \_\_\_\_\_

1. Write the number eighty-five 3 more times. How many digits are on the line? \_\_\_\_\_

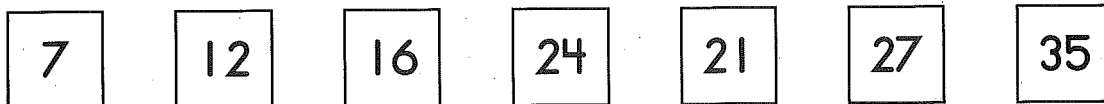


2. Donaphun had 41¢. Show this using the least number of dimes and pennies. Color the pennies brown.



He found another dime. Draw the dime.  
 How much money does Donaphun have now? \_\_\_\_\_


3. Someone made a mistake when they put these number cards in order. Circle a number card that you would move so that the number cards will be in order.



4. Color the even numbers in Problem 3 yellow.  
 5. Fill in the missing numbers.

$\begin{array}{r} 2 \\ + \square \\ \hline 10 \end{array}$	$\begin{array}{r} \square \\ + 7 \\ \hline 10 \end{array}$	$\begin{array}{r} 5 \\ + \square \\ \hline 10 \end{array}$	$\begin{array}{r} \square \\ + 1 \\ \hline 10 \end{array}$	$\begin{array}{r} \square \\ + 4 \\ \hline 10 \end{array}$	$\begin{array}{r} 10 \\ + \square \\ \hline 10 \end{array}$
--	--	--	--	--	---

6. Ask exactly 10 people whether they like the color red or the color blue better. Show their choices on this graph.



Which color did most of the people you asked like better? \_\_\_\_\_

Name \_\_\_\_\_

1. Write a number that is between 29 and 35 when you count by 1's.

$$29 \quad \square \quad 35$$

2. Lucio had 32¢. Show this using the least number of dimes and pennies. Color the pennies brown.

He found another dime. Draw the dime.  
How much money does Lucio have now? \_\_\_\_\_

3. Someone made a mistake when they put these number cards in order. Circle a number card that you would move so that the number cards will be in order.

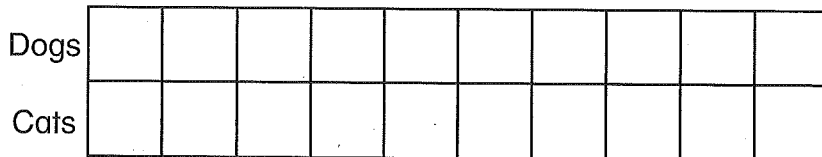
8	14	18	17	23	29	34
---	----	----	----	----	----	----

4. Color the odd numbers in Problem 3 yellow.

5. Fill in the missing numbers.

$\square$	3	$\square$	9	6	$\square$
+ 8	+ $\square$	+ 5	+ $\square$	+ $\square$	+ 0
-----	-----	-----	-----	-----	-----
10	10	10	10	10	10

6. Ask exactly 10 people whether they like cats or dogs better.  
Show their choices on this graph.



Which pet did most of the people you asked like better? \_\_\_\_\_

This page may not be reproduced without permission of Harcourt Achieve Inc.