

Name _____

(Draw a line segment for your name.)

Date _____

Day of the Week _____

Tally marks

1. Write the number eighty-two 3 more times. How many digits are on the line? _____

2. Write a story for the number sentence $4 + 1 = 5$.

3. Three children chose apples.

Five children chose oranges.

Draw a picture of the apples and oranges on the graph.

How many more children chose oranges than apples? _____

Apple									
Orange									





Apple



Orange

4. Draw lines to divide the squares into fourths in two different ways. Color one fourth of each square.



5. Count by 10's from 7. Fill in the numbers you say.

7									
---	--	--	--	--	--	--	--	--	--

6. Write the answers.

$7 - 1 =$ _____

$7 + 6 =$ _____

$6 + 2 =$ _____

$9 - 2 =$ _____

$$\begin{array}{r} 36\text{¢} \\ + 10\text{¢} \\ \hline \end{array}$$

$$\begin{array}{r} 17\text{¢} \\ + 10\text{¢} \\ \hline \end{array}$$

This page may not be reproduced without permission of Harcourt Achieve Inc.

Name _____

1. Write a number that is between 49 and 55.



2. Write a story for the number sentence $1 + 5 = 6$.

3. Four children chose peaches.

Five children chose bananas.

Draw a picture of the peaches and bananas on the graph.

How many more children chose bananas than peaches? _____

Peach									
Banana									





Peach



Banana

4. Draw lines to divide the squares into fourths in two different ways. Color three fourths of each square.



5. Count by 10's from 8. Fill in the numbers you say.

8									
---	--	--	--	--	--	--	--	--	--

6. Write the answers.

$9 - 1 = \underline{\quad}$

$8 + 9 = \underline{\quad}$

29¢

15¢

$7 + 2 = \underline{\quad}$

$5 - 2 = \underline{\quad}$

$$\begin{array}{r} 29\text{¢} \\ + 10\text{¢} \\ \hline \end{array}$$

$$\begin{array}{r} 15\text{¢} \\ + 10\text{¢} \\ \hline \end{array}$$

This page may not be reproduced without permission of Harcourt Achieve Inc.