

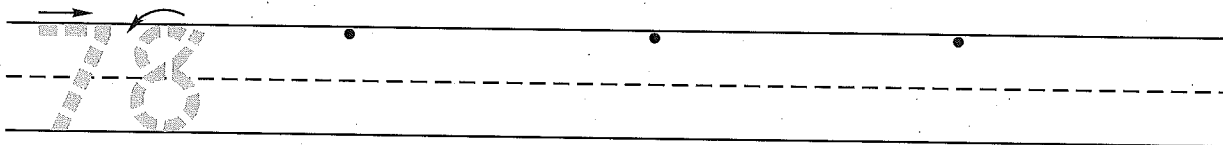
Name. _____
 (Draw a line segment for your name.)

Date _____


Tally marks

Day of the Week _____

1. Write the number seventy-eight 3 more times. How many digits are on the line? _____



2. Mrs. Dietsch counted six red shoes and eight blue shoes in the closet. Draw a picture and write a number sentence to show the shoes in the closet.



Number sentence _____

How many shoes are in the closet? _____ shoes

3. William's receipt at the classroom store looked like this:

How much money did he spend for the two items? _____

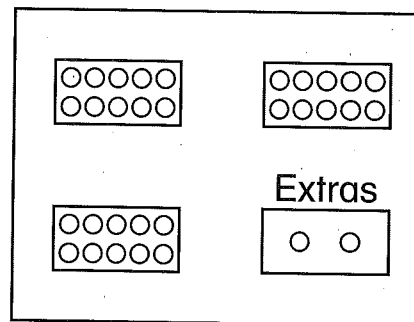
	dimes	pennies	
pickles	2	7	¢
pie	3	1	¢
<hr/>			
Total			¢

4. Sara put her pennies in groups of 10.

How many groups of 10 does she have? _____ groups of 10

How many extra pennies does she have? _____ pennies

How many pennies does she have altogether? _____ pennies



5. Write the answers.

$7 - 1 = \underline{\quad}$

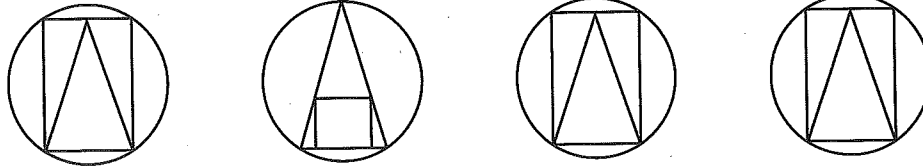
$11 - 2 = \underline{\quad}$

$2 - 0 = \underline{\quad}$

$6 - 2 = \underline{\quad}$

Name _____

1. Circle the one that is different.



2. Gary drew 7 small balls and 3 large balls. Draw a picture and write a number sentence to show the balls Gary drew.

Number sentence _____

How many balls did Gary draw? _____ balls

3. Mark's receipt at the classroom store looked like this:

How much money did he spend for the two items? _____

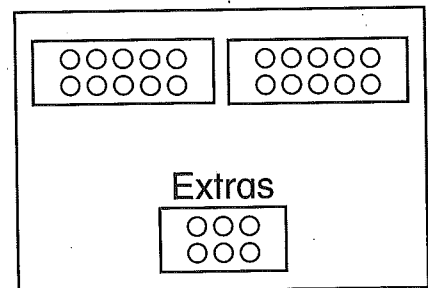
	dimes	pennies	
cake mix	4	3	¢
napkins +	3	6	¢
Total			¢

4. Julie put her pennies in groups of 10.

How many groups of 10 does she have? _____ groups of 10

How many extra pennies does she have? _____ pennies

How many pennies does she have altogether? _____ pennies



○ = penny

5. Write the answers.

$5 - 0 = \underline{\quad}$

$10 - 2 = \underline{\quad}$

$9 - 1 = \underline{\quad}$

$5 - 5 = \underline{\quad}$