

Name .

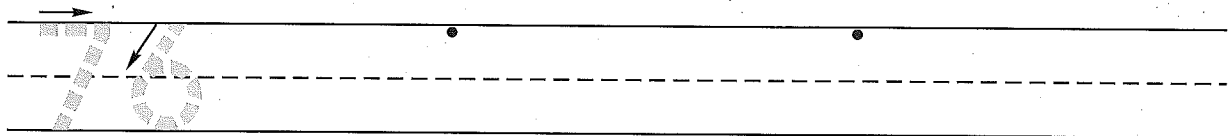
(Draw a line segment for your name.)

Date \_\_\_\_\_

Day of the Week \_\_\_\_\_

Tally marks

1. Write the number seventy-six 2 more times. How many digits are on the line? \_\_\_\_\_



2. Write your first name. Put one letter in each square.

11 empty squares for writing a first name.

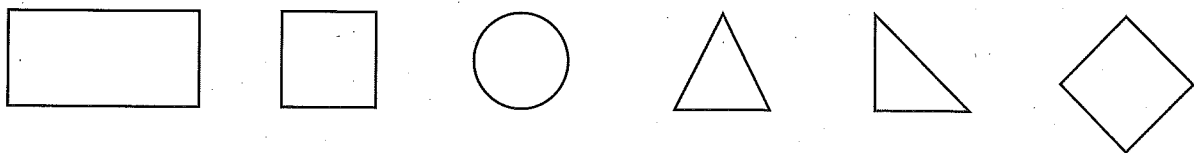
Write your last name. Put one letter in each square.

11 empty squares for writing a last name.

Which has more letters, your first or last name? first last same

How many more letters does it have? \_\_\_\_\_ letters

3. Color the congruent shapes green. (Congruent shapes are the same size and shape.)



4. Write the answers.

Four addition problems: 4+4, 4+5, 3+0, 3+1, 3+2, 6+6, 6+7.

5. Theresa's receipt at the classroom store looked like this:

How much money did she spend for two items? \_\_\_\_\_

Receipt table with items: cake mix (1 dime, 8 pennies), juice (4 dimes, 1 penny), and Total.

Name \_\_\_\_\_

1. Circle the number that is between 24 and 26.

23	24	25	26	27	28
----	----	----	----	----	----

2. Write the first name of someone who lives with you. Put one letter in each square.

--	--	--	--	--	--	--	--	--	--	--	--

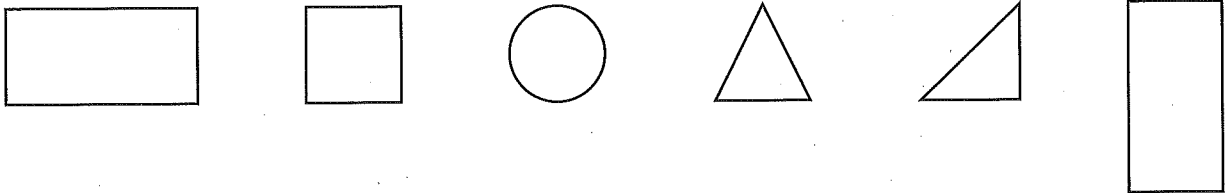
Write that person's last name. Put one letter in each square.

--	--	--	--	--	--	--	--	--	--	--	--

Which has more letters, the first or last name?    **first**    **last**    **same**

How many more letters does it have? \_\_\_\_\_ letters

3. Color the congruent shapes green. (Congruent shapes are the same size and shape.)



4. Write the answers.

$\begin{array}{r} 3 \\ + 3 \\ \hline \end{array}$	$\begin{array}{r} 3 \\ + 4 \\ \hline \end{array}$	$\begin{array}{r} 8 \\ + 0 \\ \hline \end{array}$	$\begin{array}{r} 8 \\ + 1 \\ \hline \end{array}$	$\begin{array}{r} 8 \\ + 2 \\ \hline \end{array}$	$\begin{array}{r} 5 \\ + 5 \\ \hline \end{array}$	$\begin{array}{r} 5 \\ + 6 \\ \hline \end{array}$
---	---	---	---	---	---	---

5. Ted's receipt at the classroom store looked like this:

How much money did he spend for the two items? \_\_\_\_\_

	dimes	pennies	
crackers	3	2	¢
napkins +	6	0	¢
<hr/>			
Total			¢