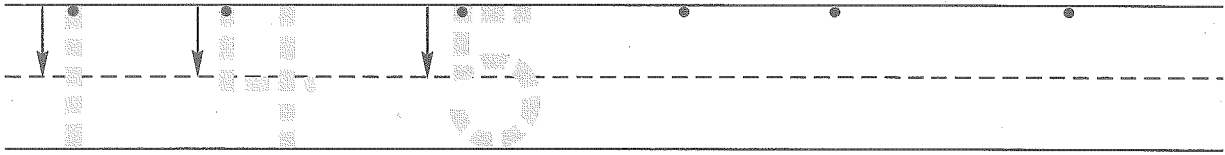




Name _____



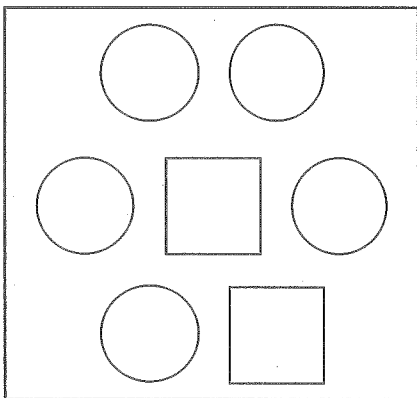
1. Write the numbers.



2. Point to the square on the right. Write the number 7 in the square.
Point to the square on the left. Write the number 2 in the square.



3. Color the circles green.
Color the squares orange.



How many circles?

=====

How many squares?

=====

How many circles
and squares together?

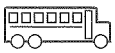
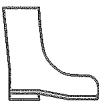
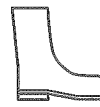
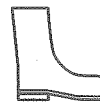
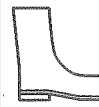
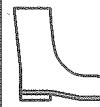
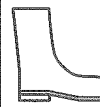
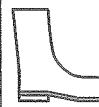



=====

4. How many are in each row? Circle the row with the most.

=====

=====

=====

This page may not be reproduced without permission of Harcourt Achieve Inc.