

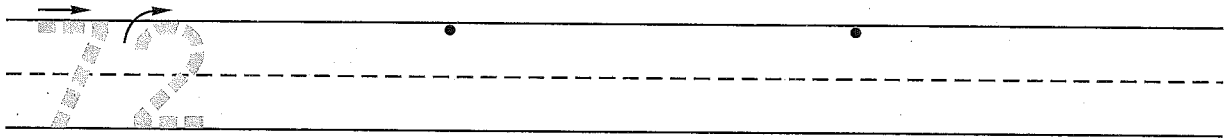
Name _____
(Draw a line segment for your name.)

Date _____


Day of the Week _____

Tally marks

1. Write the number seventy-two 2 more times. How many digits are on the line? _____

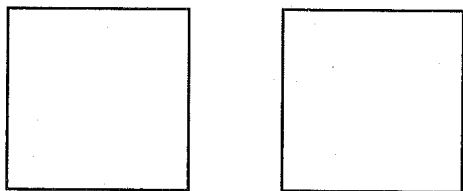


2. Mrs. Carrano has 5 pairs of earrings. Draw the earrings.




How many earrings does she have? _____ earrings

3. Divide the squares in half two different ways.
Color one half of the left square red.
Color one half of the right square blue.



4. Draw tally marks to show the number of sunny tags on the weather graph.



How many tally marks did you make? _____ tally marks

5. Write the answers.

$\begin{array}{r} 2 \\ + 3 \\ \hline \end{array}$	$\begin{array}{r} 7 \\ + 6 \\ \hline \end{array}$	$\begin{array}{r} 5 \\ + 6 \\ \hline \end{array}$	$\begin{array}{r} 3 \\ + 4 \\ \hline \end{array}$	$\begin{array}{r} 8 \\ + 7 \\ \hline \end{array}$	$\begin{array}{r} 9 \\ + 8 \\ \hline \end{array}$	$\begin{array}{r} 4 \\ + 5 \\ \hline \end{array}$
---	---	---	---	---	---	---

Circle the sixth problem using a red crayon.
Circle the third problem using a blue crayon.


Name _____

1. Finish these number patterns.

1, 3, 5, _____, _____, _____, _____, _____



66, 67, 68, _____, _____, _____, _____, _____

2. Curtis has 4 pairs of shoes. Draw the shoes.




How many shoes does he have? _____ shoes

3. Divide the squares in half two different ways.
Color one half of the left square green.
Color one half of the right square yellow.



4. Draw tally marks to show the number of windows in your house.



How many tally marks did you make? _____ tally marks

5. Write the answers.

$$\begin{array}{r} 8 \\ + 7 \\ \hline \end{array}$$

$$\begin{array}{r} 5 \\ + 4 \\ \hline \end{array}$$

$$\begin{array}{r} 4 \\ + 3 \\ \hline \end{array}$$

$$\begin{array}{r} 5 \\ + 6 \\ \hline \end{array}$$

$$\begin{array}{r} 8 \\ + 9 \\ \hline \end{array}$$

$$\begin{array}{r} 6 \\ + 7 \\ \hline \end{array}$$

$$\begin{array}{r} 3 \\ + 2 \\ \hline \end{array}$$

Circle the fourth problem using a red crayon.
Circle the fifth problem using a blue crayon.