

Name _____

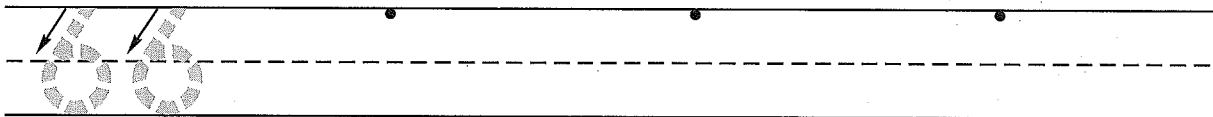
(Draw a line segment for your name.)

Date _____


Day of the Week _____

Tally marks

1. Write the number sixty-six 3 more times. How many digits are on the line? _____



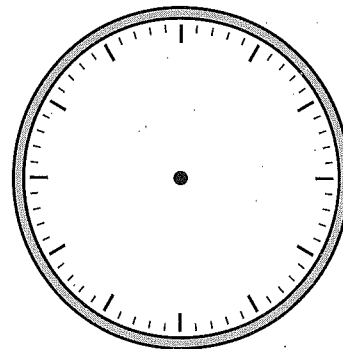

2. Mrs. Parker has 4 large pink flowers and 2 small yellow flowers in a vase on her desk. Draw a picture and write a number sentence to show how many flowers are in the vase.



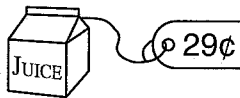
Number sentence _____

How many flowers are in the vase? _____ flowers

3. Number the clockface.
Show one o'clock on both clocks.



4. How many dimes and pennies will you need to buy the juice?



_____ dimes _____ pennies

5. Write the answers.

$$\begin{array}{r} 8 \\ - 0 \\ \hline \end{array}$$

$$\begin{array}{r} 4 \\ + 0 \\ \hline \end{array}$$

$$\begin{array}{r} 6 \\ - 2 \\ \hline \end{array}$$

$$\begin{array}{r} 9 \\ + 2 \\ \hline \end{array}$$

$$\begin{array}{r} 7 \\ + 7 \\ \hline \end{array}$$

$$\begin{array}{r} 5 \\ - 5 \\ \hline \end{array}$$

Name _____

1. Write the numbers that are one less than each number.

_____, 6

_____, 20

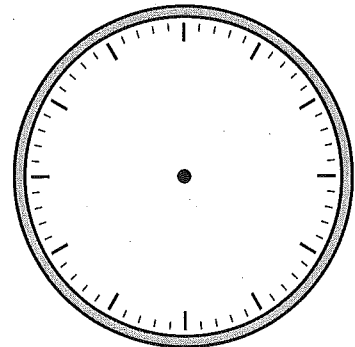
_____, 37

2. Mrs. Pinkerton had five rulers. She gave Mrs. Howell two rulers. Draw a picture and write a number sentence to show how many rulers Mrs. Pinkerton has now.

Number sentence _____

How many rulers does Mrs. Pinkerton have now? _____ rulers

3. Number the clockface.
Show nine o'clock on both clocks.



4. How many dimes and pennies will you need to buy the milk?



_____ dimes

_____ pennies

5. Write the answers.

$$\begin{array}{r} 9 \\ - 0 \\ \hline \end{array}$$

$$\begin{array}{r} 5 \\ + 0 \\ \hline \end{array}$$

$$\begin{array}{r} 7 \\ - 2 \\ \hline \end{array}$$

$$\begin{array}{r} 8 \\ + 2 \\ \hline \end{array}$$

$$\begin{array}{r} 6 \\ + 6 \\ \hline \end{array}$$

$$\begin{array}{r} 2 \\ - 2 \\ \hline \end{array}$$