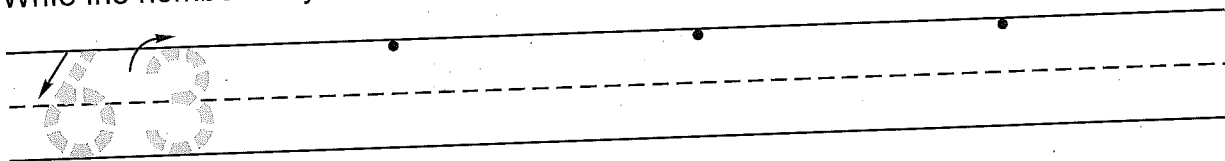


Name _____


Date _____

Day of the Week _____

1. Write the number sixty-three 3 more times. How many digits are on the line? _____



2. Tamara had nine dimes. She gave three dimes to Michelle. Draw the dimes and write a number sentence to show how many dimes Tamara has now.




Number sentence _____

How many dimes does she have now? _____ dimes

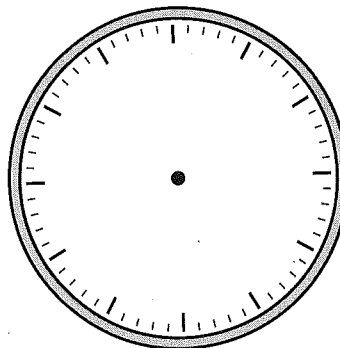
Count by 10's to find out how much money this is. _____

3. Draw a line to divide the rectangle in half.



4. Number the clockface.
Show this time.

5:00



5. Write the answers.

3	10	7	4	11	8	5	2	9	6
- 2	- 2	- 2	- 2	- 2	- 2	- 2	- 2	- 2	- 2
—	—	—	—	—	—	—	—	—	—

Name _____

1. Write any number that is between 35 and 43 when you count by 1's.

35 43

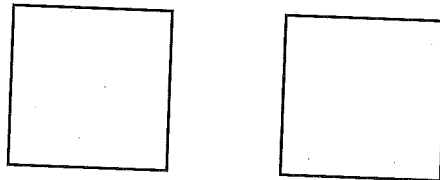
2. Melissa had eight dimes. She gave three dimes to Jason. Draw the dimes and write a number sentence to show how many dimes Melissa has now.

Number sentence _____

How many dimes does she have now? _____ dimes

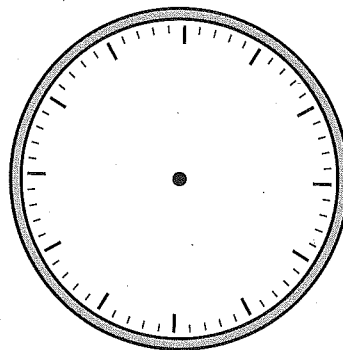
Count by 10's to find out how much money this is. _____

3. Draw lines to show how to divide the squares in half two different ways.



4. Number the clockface.
Show this time.

10:00



5. Write the answers.

$\begin{array}{r} 2 \\ - 2 \\ \hline \end{array}$	$\begin{array}{r} 7 \\ - 2 \\ \hline \end{array}$	$\begin{array}{r} 4 \\ - 2 \\ \hline \end{array}$	$\begin{array}{r} 9 \\ - 2 \\ \hline \end{array}$	$\begin{array}{r} 10 \\ - 2 \\ \hline \end{array}$	$\begin{array}{r} 3 \\ - 2 \\ \hline \end{array}$	$\begin{array}{r} 8 \\ - 2 \\ \hline \end{array}$	$\begin{array}{r} 11 \\ - 2 \\ \hline \end{array}$	$\begin{array}{r} 6 \\ - 2 \\ \hline \end{array}$	$\begin{array}{r} 5 \\ - 2 \\ \hline \end{array}$
---	---	---	---	--	---	---	--	---	---

This page may not be reproduced without permission of Harcourt Achieve Inc.