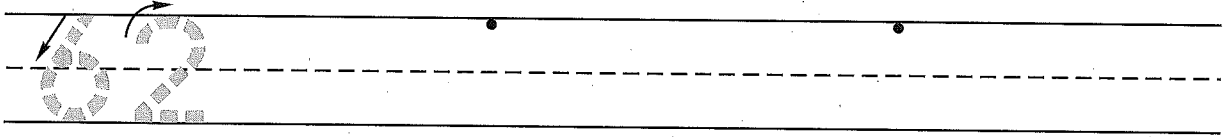


Name _____


Date _____

Day of the Week _____

1. Write the number sixty-two 2 more times. How many digits are on the line? _____

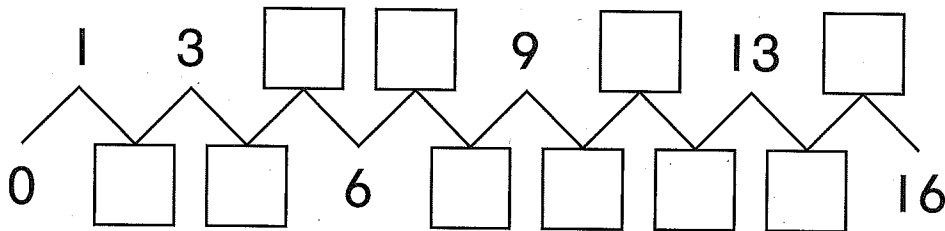


2. Three children wore blue mittens to school. Draw the mittens. Circle the pairs.



3. Fill in the missing numbers.

Circle all the even numbers using a red crayon.



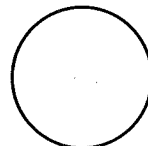
4. Write the answers.

2	4	6	8	10	3	5	7	9	11
- 2	- 2	- 2	- 2	- 2	- 2	- 2	- 2	- 2	- 2
_____	_____	_____	_____	_____	_____	_____	_____	_____	_____

5. Spell the word for each number.

5 _____ 4 _____ 3 _____

6. Draw a line of symmetry in each shape.
Color one half of each shape.



Name _____

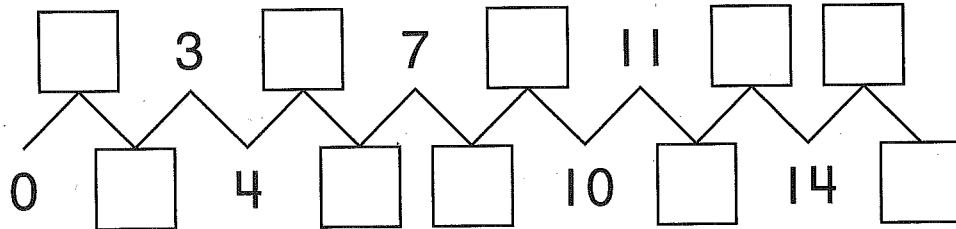
1. Fill in the missing numbers.

	72						78		
--	----	--	--	--	--	--	----	--	--

2. Four children wore red mittens to school. Draw the mittens. Circle the pairs.

3. Fill in the missing numbers.

Circle all the odd numbers using a blue crayon.



4. Write the answers.

2	4	6	8	10	3	5	7	9	11
- 2	- 2	- 2	- 2	- 2	- 2	- 2	- 2	- 2	- 2

5. Spell the word for each number.

3 _____ 4 _____ 5 _____

6. Draw a line of symmetry in each shape.

Color one half of each shape.

