

Name \_\_\_\_\_

# Guided Class Practice 59A

Date \_\_\_\_\_


Math 1 (for use with Lesson 59)

Day of the Week \_\_\_\_\_

1. Write the number fifty-four 2 more times. How many digits are on the line? \_\_\_\_\_



2. The children in Mrs. Castellon's classroom published eight books. The children in Mrs. Proto's classroom published eight books also. Draw a picture and write a number sentence to show the number of books the children published altogether.




Number sentence \_\_\_\_\_

How many books did the children publish altogether? \_\_\_\_\_ books

3. Circle the odd numbers.

1    2    3    4    5    6    7    8    9    10  
11   12   13   14   15   16   17   18   19   20

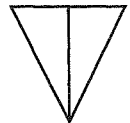
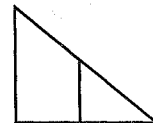
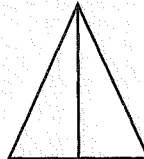
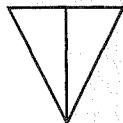
4. Color the penny brown. How much money is this? \_\_\_\_\_



5. Write the answers.

$\begin{array}{r} 1 \\ + 2 \\ \hline \end{array}$	$\begin{array}{r} 2 \\ + 1 \\ \hline \end{array}$	$\begin{array}{r} 3 \\ + 2 \\ \hline \end{array}$	$\begin{array}{r} 2 \\ + 3 \\ \hline \end{array}$	$\begin{array}{r} 5 \\ + 2 \\ \hline \end{array}$	$\begin{array}{r} 2 \\ + 5 \\ \hline \end{array}$	$\begin{array}{r} 7 \\ + 2 \\ \hline \end{array}$	$\begin{array}{r} 2 \\ + 7 \\ \hline \end{array}$	$\begin{array}{r} 9 \\ + 2 \\ \hline \end{array}$	$\begin{array}{r} 2 \\ + 9 \\ \hline \end{array}$
---------------------------------------------------	---------------------------------------------------	---------------------------------------------------	---------------------------------------------------	---------------------------------------------------	---------------------------------------------------	---------------------------------------------------	---------------------------------------------------	---------------------------------------------------	---------------------------------------------------

6. Color the two that are the same yellow.



Name \_\_\_\_\_

### Homework 59B

Math 1 (for use with Lesson 59)

1. Fill in the missing numbers.

	72					77			
--	----	--	--	--	--	----	--	--	--

2. Tim drew seven pictures for his book and Susan drew seven pictures for her book. Draw a picture and write a number sentence to show the number of pictures they drew altogether.

Number sentence \_\_\_\_\_

How many pictures did the children draw altogether? \_\_\_\_\_ pictures

3. Circle the even numbers.

1    2    3    4    5    6    7    8    9    10  
11   12   13   14   15   16   17   18   19   20

4. Color the pennies brown. How much money is this? \_\_\_\_\_



5. Write the answers.

$\begin{array}{r} 1 \quad 2 \\ + 2 \quad + 1 \\ \hline \end{array}$	$\begin{array}{r} 3 \quad 2 \\ + 2 \quad + 3 \\ \hline \end{array}$	$\begin{array}{r} 5 \quad 2 \\ + 2 \quad + 5 \\ \hline \end{array}$	$\begin{array}{r} 7 \quad 2 \\ + 2 \quad + 7 \\ \hline \end{array}$	$\begin{array}{r} 9 \quad 2 \\ + 2 \quad + 9 \\ \hline \end{array}$
---------------------------------------------------------------------	---------------------------------------------------------------------	---------------------------------------------------------------------	---------------------------------------------------------------------	---------------------------------------------------------------------

6. Color the two that are the same.

--	--	--	--	--	--