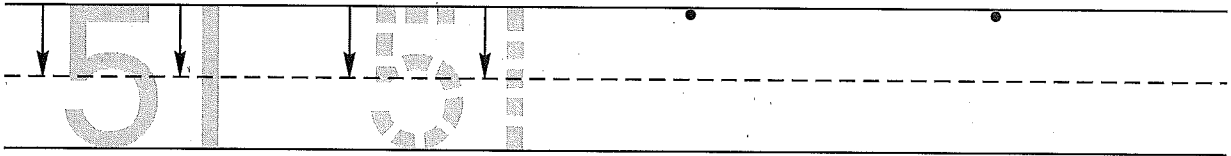


Name _____


Date _____

Day of the Week _____

1. Trace the number fifty-one. Write the number fifty-one 2 more times.



2. There are four stuffed bears and three books on Bob's bed. There are two more stuffed bears on a chair in his room. Draw a picture and write a number sentence to show the stuffed bears.



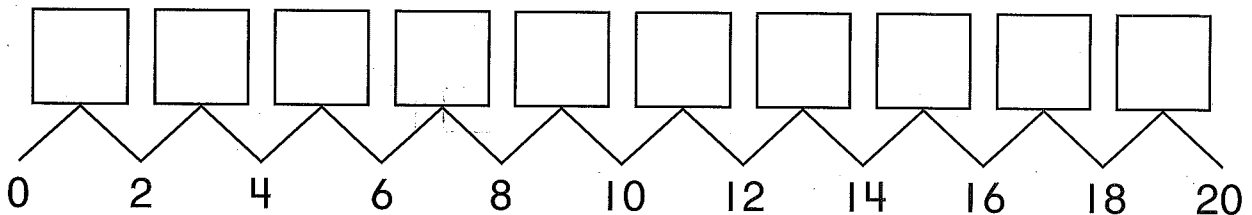
Number sentence _____

How many stuffed bears does Bob have? _____ stuffed bears

3. Color the squares with even numbers yellow.

10	11	12	13	14	15	16	17	18	19	20
----	----	----	----	----	----	----	----	----	----	----


4. Fill in the missing numbers.



5. Draw a line to divide the cracker in half.

Use a brown crayon to show that one half has peanut butter.

Write the fraction one half in the other half.



Name _____

1. Fill in the missing numbers.

	52				56				60
--	----	--	--	--	----	--	--	--	----

2. There are six stuffed dogs and five books on Carla's bed. There are four more stuffed dogs on a table. Draw a picture and write a number sentence to show the stuffed dogs.

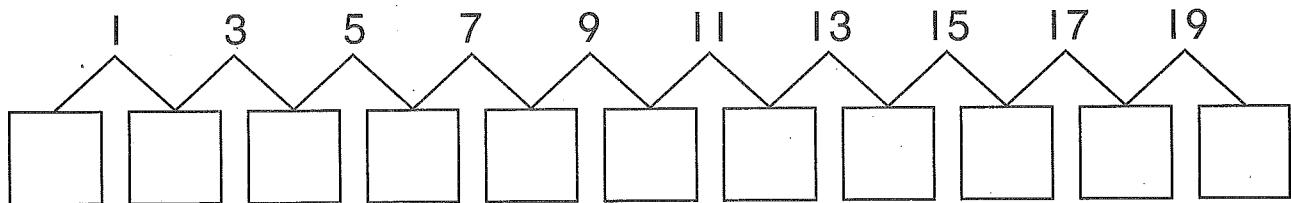
Number sentence _____

How many stuffed dogs does Carla have? _____ stuffed dogs

3. Color the squares with odd numbers.

10	11	12	13	14	15	16	17	18	19	20
----	----	----	----	----	----	----	----	----	----	----

4. Fill in the missing numbers.



5. Draw a line to divide the cracker in half.

Use a brown crayon to show that one half has peanut butter.

Write the fraction one half in the other half.