

Name _____

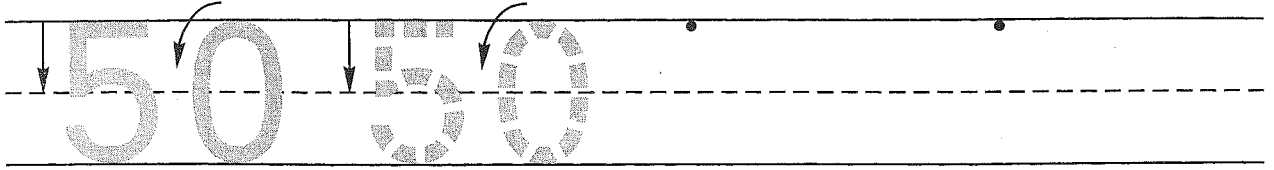
Guided Class Practice 55A

Date _____


Math 1 (for use with Lesson 55, Part 1)

Day of the Week _____

1. Trace the number fifty. Write the number fifty 2 more times.



2. Five children were skating. Five more children joined them. Draw a picture and write a number sentence to show how many children are skating now.




Number sentence _____

How many children are skating now? _____ children


3. Mrs. Murray divided this cracker in half.
Draw a line to divide the cracker in half.

She put peanut butter on one of the halves.
Use a brown crayon to show the peanut butter.

She put jelly on the other half.
Use a purple crayon to show the jelly.



4. Color the penny brown. How much money is this? _____



5. Count by 2's. Fill in the missing numbers.

2, 4, 6, _____, _____, _____, _____, _____, _____, _____

Name _____

Homework 55B

Math 1 (for use with Lesson 55, Part 1)

1. Fill in the missing numbers.


		43				47			50
--	--	----	--	--	--	----	--	--	----

2. Eight children were skating. Three children were cold and went home. Draw a picture and write a number sentence to show how many children are skating now.


Number sentence _____

How many children are skating now? _____ children

3. Ms. Mulligan divided this cracker in half.
Draw a line to divide the cracker in half.
She put peanut butter on one of the halves.
Use a brown crayon to show the peanut butter.
She put jelly on the other half.
Use a purple crayon to show the jelly.



4. Color the pennies brown. How much money is this? _____



5. Count by 2's. Fill in the missing numbers.

2, 4, 6, _____, _____, _____, _____, _____, _____