

Name _____

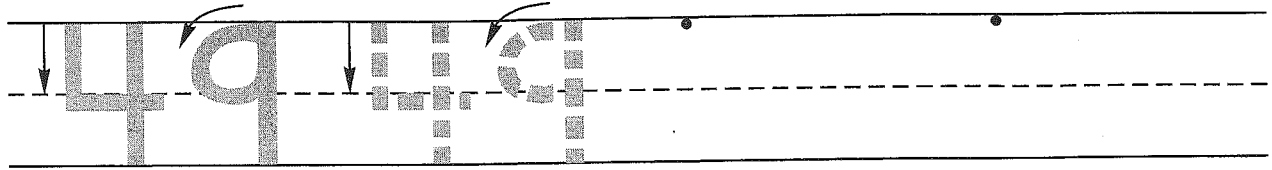
Guided Class Practice 54A

Date _____


Math 1 (for use with Lesson 54)

Day of the Week _____

1. Trace the number forty-nine. Write the number forty-nine 2 more times.



2. Eight icicles were hanging from the roof. Four icicles fell off. Draw a picture and write a number sentence to show what happened.




Number sentence _____

How many icicles are hanging from the roof now? _____ icicles

3. Write the numbers that are one less and one more.

_____, 9, _____, 13, _____

4. Color the penny brown. How much money is this? _____



5. Count by 2's. Fill in the missing numbers.

2, 4, 6, _____, _____, _____, _____, _____, _____

Count by 10's. Fill in the missing numbers.

10, 20, 30, _____, _____, _____, _____, _____, _____

Name _____

Homework 54B

Math 1 (for use with Lesson 54)

1. Fill in the missing numbers.

41				45					50
----	--	--	--	----	--	--	--	--	----

2. Six birds were eating at a bird feeder. Three birds flew away. Draw a picture and write a number sentence to show what happened.


Number sentence _____

How many birds are at the feeder now? _____ birds

3. Write the numbers that are one less and one more.

_____, 6, _____ _____, 17, _____

4. Color the pennies brown. How much money is this? _____



5. Count by 2's. Fill in the missing numbers.

2, 4, 6, _____, _____, _____, _____, _____, _____

Count by 10's. Fill in the missing numbers.

10, 20, 30, _____, _____, _____, _____, _____, _____