

Name \_\_\_\_\_

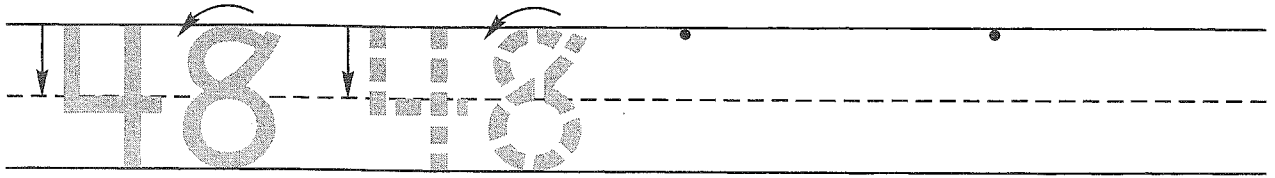
**Guided Class Practice 53A**

Date \_\_\_\_\_


**Math 1** (for use with Lesson 53)

Day of the Week \_\_\_\_\_

1. Trace the number forty-eight. Write the number forty-eight 2 more times.



2. Steven had 6 cookies in his lunch box. He ate 3 cookies for lunch. Draw a picture and write a number sentence to show what happened.




Number sentence \_\_\_\_\_

How many cookies are in the lunch box now? \_\_\_\_\_ cookies

3. Count by 10's. Fill in the missing numbers.

10, 20, 30, \_\_\_\_\_, \_\_\_\_\_, \_\_\_\_\_, \_\_\_\_\_, \_\_\_\_\_, \_\_\_\_\_

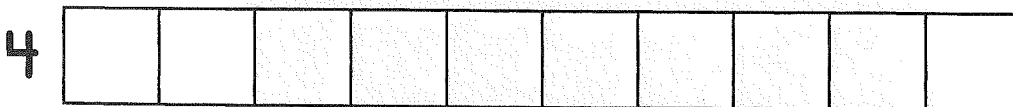

4. Color the pennies brown. How much money is this? \_\_\_\_\_



5. How many squares are in the first train? \_\_\_\_\_ squares

Color

How many are left? \_\_\_\_\_



Name \_\_\_\_\_

### Homework 53B

Math 1 (for use with Lesson 53)

1. Fill in the missing numbers.

22, \_\_\_\_\_, 24, \_\_\_\_\_, 26, \_\_\_\_\_, 28, \_\_\_\_\_, 30

2. Monica had 10 pennies. She lost 3 pennies. Draw a picture and write a number sentence to show what happened.


Number sentence \_\_\_\_\_

How many pennies does she have now? \_\_\_\_\_ pennies

3. Count by 10's. Fill in the missing numbers.

10, 20, 30, \_\_\_\_\_, \_\_\_\_\_, \_\_\_\_\_, \_\_\_\_\_, \_\_\_\_\_, \_\_\_\_\_, \_\_\_\_\_

4. Color the pennies brown. How much money is this? \_\_\_\_\_



5. How many squares are in the first train? \_\_\_\_\_ squares

Color

How many are left?

7

--	--	--	--	--	--	--	--	--	--	--

\_\_\_\_\_

6

--	--	--	--	--	--	--	--	--	--	--

\_\_\_\_\_