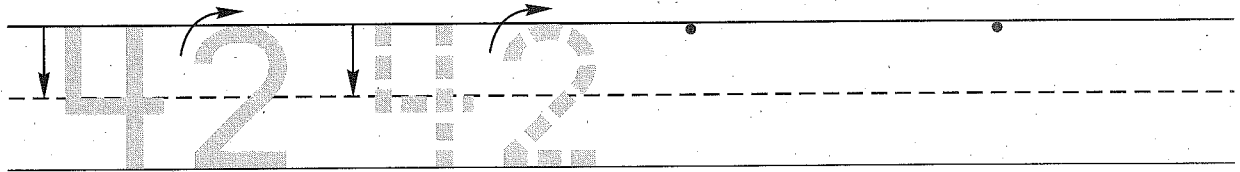


Name \_\_\_\_\_


Date \_\_\_\_\_

Day of the Week \_\_\_\_\_

1. Trace the number forty-two. Write the number forty-two 2 more times.




2. Bo used 3 cups of water to fill one bottle. He used 2 cups of water to fill another bottle. Draw a picture and write a number sentence to show how many cups of water he used.



Number sentence \_\_\_\_\_

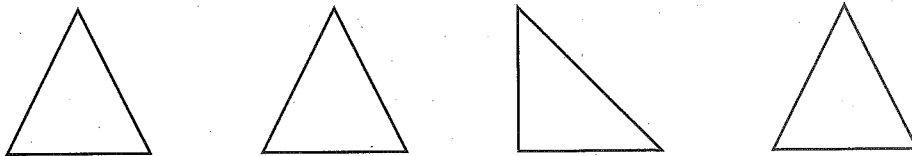
How many cups of water did he use? \_\_\_\_\_ cups

3. How many dimes do you see? \_\_\_\_\_ dimes

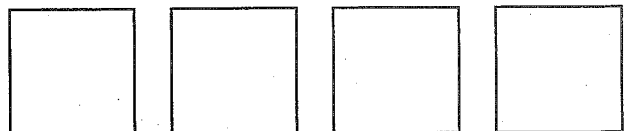


How much money is this? \_\_\_\_\_

4. Circle the one that is different.



5. Write the letter **g** in the fourth square.  
Write the letter **o** in the second square.  
Write the letter **l** in the first square.  
Write the letter **n** in the third square.




Name \_\_\_\_\_

1. Circle the number in the box that is between 5 and 8 when you count by 1's.

5 \_\_\_\_\_ 8




2. Brandon used 5 cups of water to fill one bottle. He used 3 cups of water to fill another bottle. Draw a picture and write a number sentence to show how many cups of water he used.



Number sentence \_\_\_\_\_


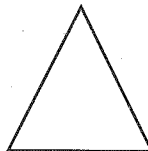

How many cups of water did he use? \_\_\_\_\_ cups

3. How many dimes do you see? \_\_\_\_\_ dimes



How much money is this? \_\_\_\_\_

4. Circle the one that is different.



5. Write the letter **h** in the second square.  
Write the letter **o** in the middle square.  
Write the letter **t** in the last square.  
Write the letter **r** in the fourth square.  
Write the letter **s** in the first square.

