

Name _____

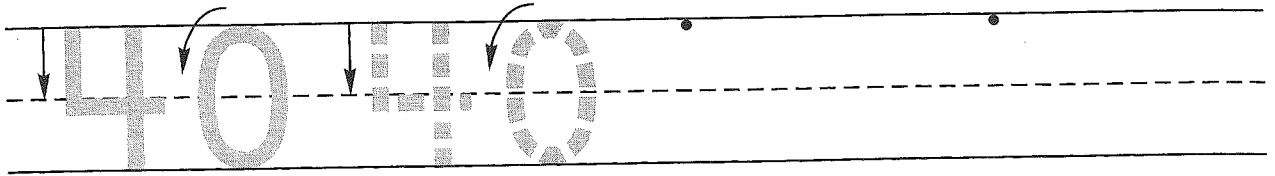
Guided Class Practice 44A

Date _____


Math 1 (for use with Lesson 44)

Day of the Week _____

1. Trace the number forty. Write the number forty 2 more times.



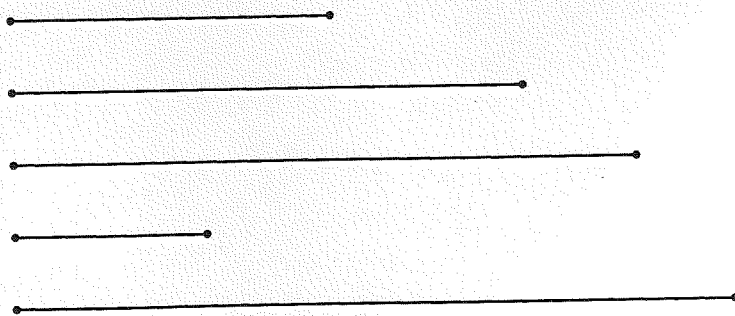
2. The children in Room Three have 2 tennis balls and a basketball to use during recess. Draw a picture and write a number sentence to show how many balls they have.



Number sentence _____

How many balls do they have? _____ balls

3. Trace the longest line segment with a red crayon.
Trace the second-longest line segment with a yellow crayon.
Trace the third-longest line segment with an orange crayon.
Trace the shortest line segment with a blue crayon.
Trace the second-shortest line segment with a green crayon.



4. Write the answers.

6	5	8	4	2	3	9	8
<u>- 1</u>	<u>+ 1</u>	<u>+ 0</u>	<u>- 1</u>	<u>+ 2</u>	<u>+ 0</u>	<u>- 1</u>	<u>+ 1</u>

Name _____


Homework 44B

Math 1 (for use with Lesson 44)

1. Write any number that is between 21 and 26 when you count by 1's.

21 26

2. The children in Room Two have 4 tennis balls and a kickball to use during recess. Draw a picture and write a number sentence to show how many balls they have.



Number sentence _____

How many balls do they have? _____ balls

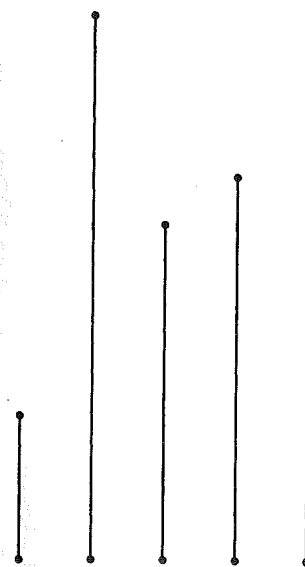
3. Trace the longest line segment with a red crayon.

Trace the second-longest line segment with a yellow crayon.

Trace the third-longest line segment with an orange crayon.

Trace the shortest line segment with a blue crayon.

Trace the second-shortest line segment with a green crayon.



4. Write the answers.

$$\begin{array}{r} 5 \\ - 1 \\ \hline \end{array}$$

$$\begin{array}{r} 3 \\ + 1 \\ \hline \end{array}$$

$$\begin{array}{r} 6 \\ + 0 \\ \hline \end{array}$$

$$\begin{array}{r} 7 \\ - 1 \\ \hline \end{array}$$

$$\begin{array}{r} 8 \\ + 8 \\ \hline \end{array}$$

$$\begin{array}{r} 9 \\ + 0 \\ \hline \end{array}$$

$$\begin{array}{r} 8 \\ - 1 \\ \hline \end{array}$$

$$\begin{array}{r} 2 \\ + 1 \\ \hline \end{array}$$

Name _____

Homework 44B

Math 1 (for use with Lesson 44)

1. Write any number that is between 21 and 26 when you count by 1's.

21 26

2. The children in Room Two have 4 tennis balls and a kickball to use during recess. Draw a picture and write a number sentence to show how many balls they have.

Number sentence _____

How many balls do they have? _____ balls

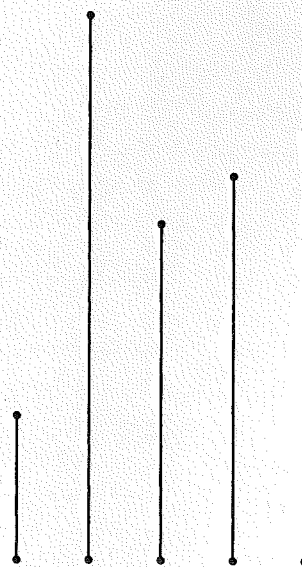
3. Trace the longest line segment with a red crayon.

Trace the second-longest line segment with a yellow crayon.

Trace the third-longest line segment with an orange crayon.

Trace the shortest line segment with a blue crayon.

Trace the second-shortest line segment with a green crayon.



4. Write the answers.

5	3	6	7	8	9	8	2
<u>- 1</u>	<u>+ 1</u>	<u>+ 0</u>	<u>- 1</u>	<u>+ 8</u>	<u>+ 0</u>	<u>- 1</u>	<u>+ 1</u>