

Name _____

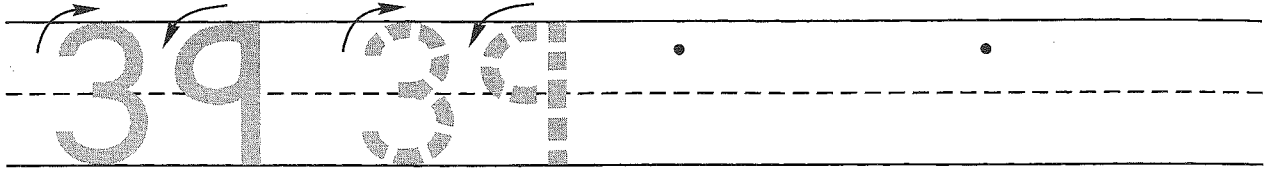
Guided Class Practice 43A

Date _____

Math 1 (for use with Lesson 43)

Day of the Week _____

1. Trace the number thirty-nine. Write the number thirty-nine 2 more times.



2. Write the letters in your first name. _____

Write the letters in a friend's first name. _____

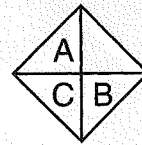

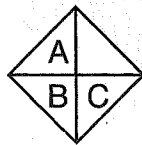
Write a number sentence to show the number of letters altogether.

How many letters is that altogether? _____ letters

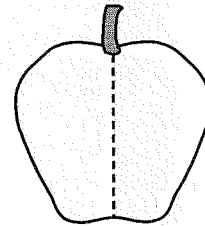
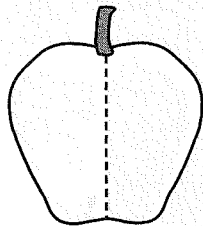
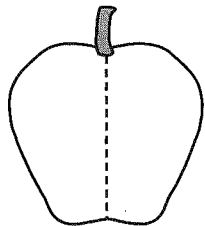
3. Write the numbers you say when you count by 10's.

10, 20, _____, _____, _____, _____, _____, _____, _____

4. Circle the one that is different.



5. Draw different ways to show 5 apple seeds.



_____ + _____ = 5

_____ + _____ = 5

_____ + _____ = 5

Name _____

Homework 43B

Math 1 (for use with Lesson 43)

1. Write any number that is between 9 and 14 when you count by 1's.

9 14

2. Write the letters in your first name. _____

Write the letters in your last name. _____

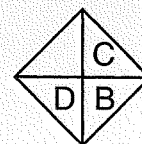
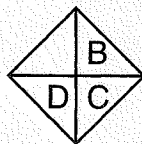
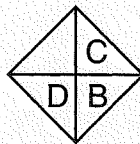
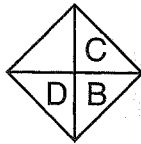
Write a number sentence to show the number of letters altogether.

How many letters is that altogether? _____ letters

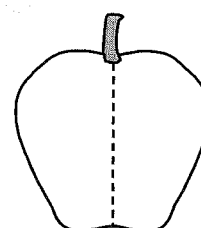
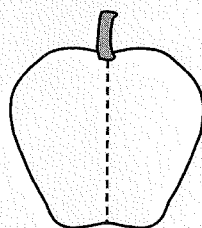
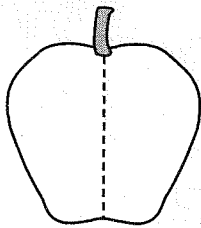
3. Write the numbers you say when you count by 10's.

10, 20, _____, 40, _____, _____, 70, _____, _____, 100

4. Circle the one that is different.



5. Draw different ways to show 10 apple seeds.



____ + ____ =

____ + ____ =

____ + ____ =