

Name \_\_\_\_\_

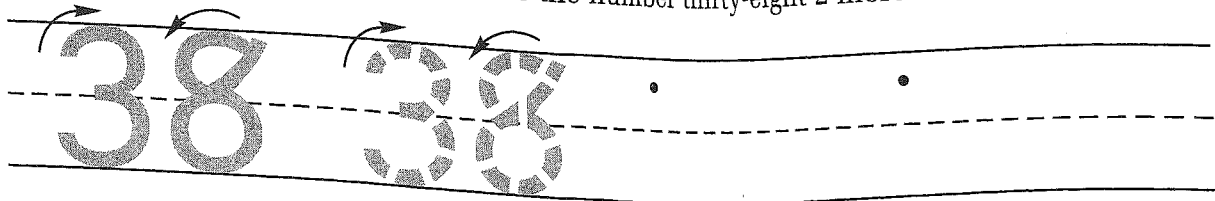
Date \_\_\_\_\_

Day of the Week \_\_\_\_\_


### Guided Class Practice 42A

Math 1 (for use with Lesson 42)

1. Trace the number thirty-eight. Write the number thirty-eight 2 more times.



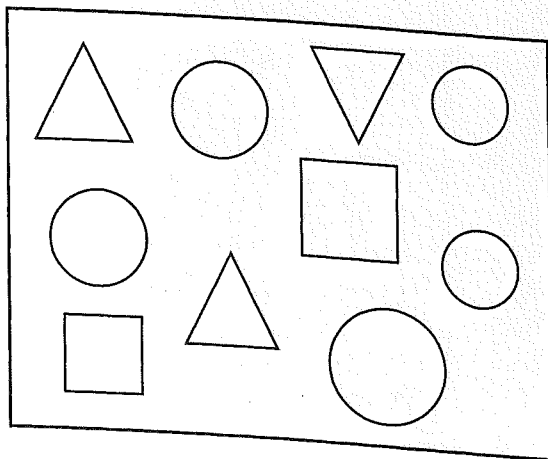
2. At the zoo Brett saw 2 adult bears and 3 baby bears. Draw a picture and write a number sentence to show how many bears he saw.




Number sentence \_\_\_\_\_

How many bears did he see? \_\_\_\_\_ bears

3. Color the triangles yellow.  
Color the squares red.  
Color the circles blue.



Color in one box for each shape.



4. Write the number that is one more.

9, \_\_\_\_\_

13, \_\_\_\_\_

24, \_\_\_\_\_

Name \_\_\_\_\_

### Homework 42B

Math 1 (for use with Lesson 42)

1. Write any number that is between 11 and 15 when you count by 1's.


11  15

2. Curtis saw 3 cats sleeping and one cat walking around. Draw a picture and write a number sentence to show how many cats he saw.

Number sentence \_\_\_\_\_

How many cats did he see? \_\_\_\_\_ cats

3. Color the triangles yellow.  
Color the squares red.  
Color the circles blue.



Color in one box for each shape.




4. Write the number that is one more.

7, \_\_\_\_\_

18, \_\_\_\_\_

26, \_\_\_\_\_