

Name \_\_\_\_\_

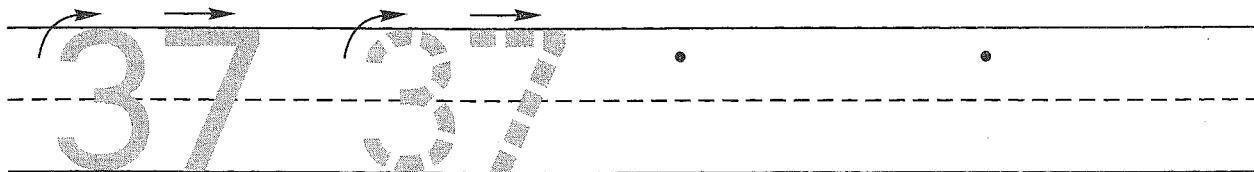
## Guided Class Practice 41A

Date \_\_\_\_\_


Math 1 (for use with Lesson 41)

Day of the Week \_\_\_\_\_

1. Trace the number thirty-seven. Write the number thirty-seven 2 more times.



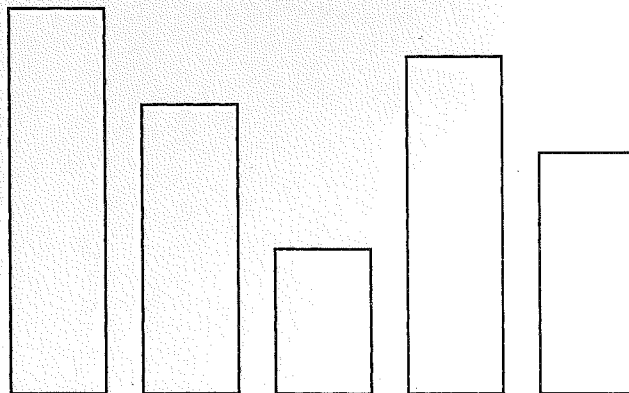
2. Jessica had a bag of nine marbles. She dropped the bag and a marble rolled out. Draw a picture and write a number sentence to show how many marbles are in the bag now.



Number sentence \_\_\_\_\_

How many marbles are in the bag now? \_\_\_\_\_ marbles

3. Color the tallest tower red.  
Color the second-tallest tower yellow.  
Color the shortest tower blue.  
Color the second-shortest tower green.  
Color the third-shortest tower orange.



4. Write the answers.

$$\begin{array}{r} 4 \\ + 1 \\ \hline \end{array}$$

$$\begin{array}{r} 6 \\ + 6 \\ \hline \end{array}$$

$$\begin{array}{r} 5 \\ + 0 \\ \hline \end{array}$$

$$\begin{array}{r} 1 \\ + 5 \\ \hline \end{array}$$

$$\begin{array}{r} 0 \\ + 3 \\ \hline \end{array}$$

$$\begin{array}{r} 8 \\ + 8 \\ \hline \end{array}$$

$$\begin{array}{r} 7 \\ + 1 \\ \hline \end{array}$$

$$\begin{array}{r} 9 \\ + 0 \\ \hline \end{array}$$