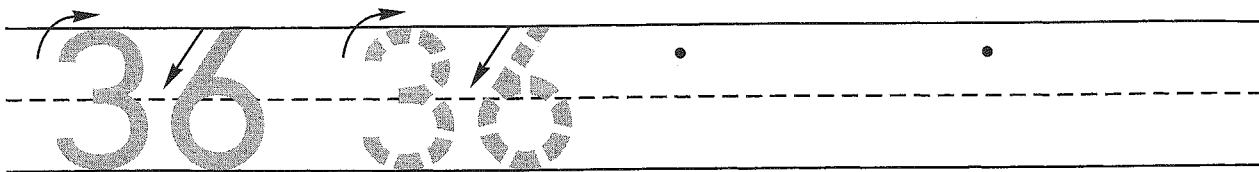


Name _____


Guided Class Practice 39A

Math 1 (for use with Lesson 39)

1. Trace the number thirty-six. Write the number thirty-six 2 more times.



2. Ted counted 3 cows standing and 2 cows lying down. Draw a picture and write a number sentence to show the number of cows Ted counted.



Number sentence _____

How many cows did Ted count? _____ cows

3. Finish this shape pattern.



4. Draw an X in the top left-hand corner of this paper.
Draw an O in the bottom right-hand corner of this paper.

5. Write the number that is one more.

7, _____

15, _____

25, _____

6. Write the answers.

$$\begin{array}{r} 4 \\ + 4 \\ \hline \end{array}$$

$$\begin{array}{r} 5 \\ + 1 \\ \hline \end{array}$$

$$\begin{array}{r} 6 \\ + 6 \\ \hline \end{array}$$

$$\begin{array}{r} 1 \\ + 7 \\ \hline \end{array}$$

$$\begin{array}{r} 9 \\ + 9 \\ \hline \end{array}$$

$$\begin{array}{r} 1 \\ + 8 \\ \hline \end{array}$$

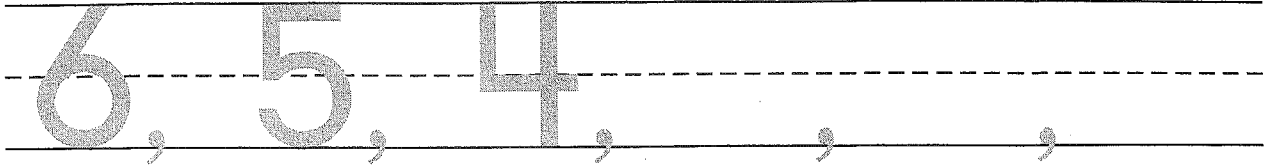
$$\begin{array}{r} 1 \\ + 0 \\ \hline \end{array}$$

Name _____


Homework 39B

Math 1 (for use with Lesson 39)

1. Write the next 3 numbers you say when you count backward.



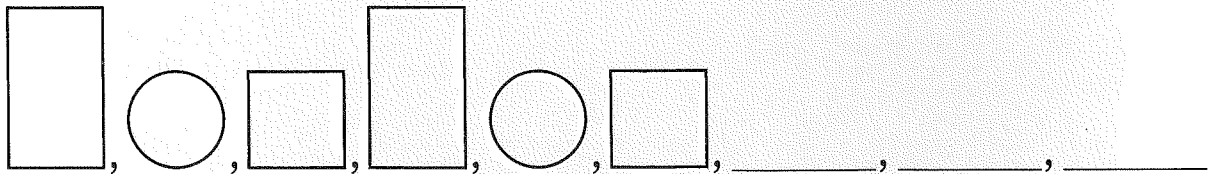
2. Two dogs and six cats are playing. Draw a picture and write a number sentence to show the number of dogs and cats that are playing.



Number sentence _____

How many dogs and cats are playing? _____ dogs and cats

3. Finish this shape pattern.



4. Draw an X in the top left-hand corner of this paper.
Draw an O in the bottom right-hand corner of this paper.

5. Write the number that is one more.

5, _____

18, _____

27, _____

6. Write the answers.

$$\begin{array}{r} 3 \\ + 3 \\ \hline \end{array}$$

$$\begin{array}{r} 4 \\ + 1 \\ \hline \end{array}$$

$$\begin{array}{r} 8 \\ + 8 \\ \hline \end{array}$$

$$\begin{array}{r} 1 \\ + 2 \\ \hline \end{array}$$

$$\begin{array}{r} 2 \\ + 2 \\ \hline \end{array}$$

$$\begin{array}{r} 1 \\ + 9 \\ \hline \end{array}$$

$$\begin{array}{r} 0 \\ + 0 \\ \hline \end{array}$$