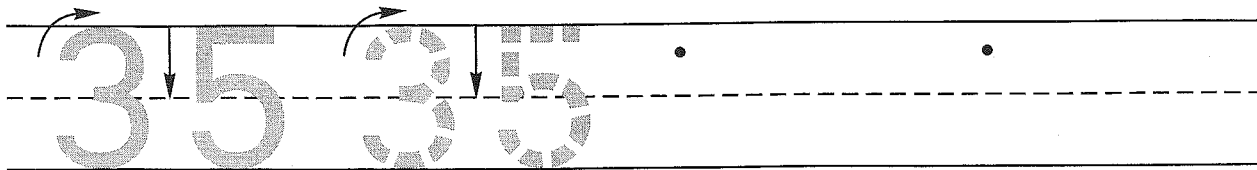


Name \_\_\_\_\_


### Guided Class Practice 38A

Math 1 (for use with Lesson 38)

1. Trace the number thirty-five. Write the number thirty-five 2 more times.



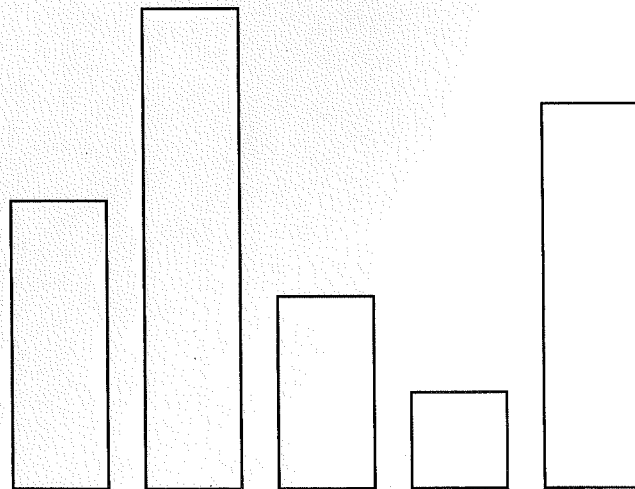
2. Mariel had 10 pennies. She lost 3 pennies. Draw a picture and write a number sentence to show the number of pennies she has now.



Number sentence \_\_\_\_\_

How many pennies does Mariel have now? \_\_\_\_\_ pennies

3. Color the tallest tower red.  
Color the second-tallest tower yellow.  
Color the shortest tower blue.



4. Write the answers.

$$\begin{array}{r} 3 \\ + 1 \\ \hline \end{array}$$

$$\begin{array}{r} 1 \\ + 5 \\ \hline \end{array}$$

$$\begin{array}{r} 1 \\ + 8 \\ \hline \end{array}$$

$$\begin{array}{r} 2 \\ + 1 \\ \hline \end{array}$$

$$\begin{array}{r} 7 \\ + 1 \\ \hline \end{array}$$

$$\begin{array}{r} 6 \\ + 6 \\ \hline \end{array}$$

$$\begin{array}{r} 8 \\ + 8 \\ \hline \end{array}$$

$$\begin{array}{r} 3 \\ + 3 \\ \hline \end{array}$$

Name \_\_\_\_\_

### Homework 38B

Math 1 (for use with Lesson 38)

1. Write the next 3 numbers you say when you count backward.


10, 9, 8, \_\_\_\_\_, \_\_\_\_\_, \_\_\_\_\_

2. Andrew had 9 pennies. He gave 6 pennies to Christina. Draw a picture and write a number sentence to show the number of pennies Andrew has now.

Number sentence \_\_\_\_\_

How many pennies does Andrew have now? \_\_\_\_\_ pennies

3. Color the longest train red.  
Color the second-longest train yellow.  
Color the shortest train blue.



4. Write the answers.

4	1	5	1	5	4	9	3
+ 1	+ 9	+ 1	+ 6	+ 5	+ 4	+ 9	+ 3