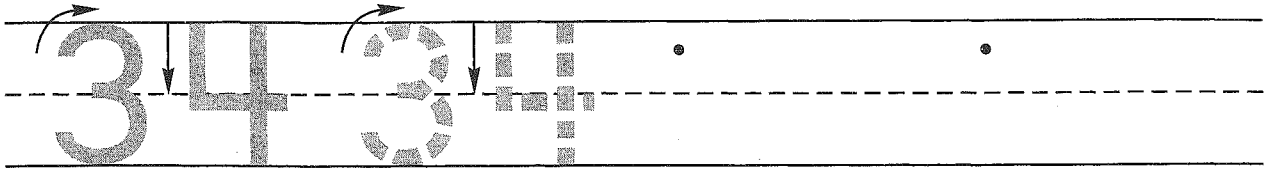


Name \_\_\_\_\_

### Guided Class Practice 37A

Math 1 (for use with Lesson 37)

1. Trace the number thirty-four. Write the number thirty-four 2 more times.

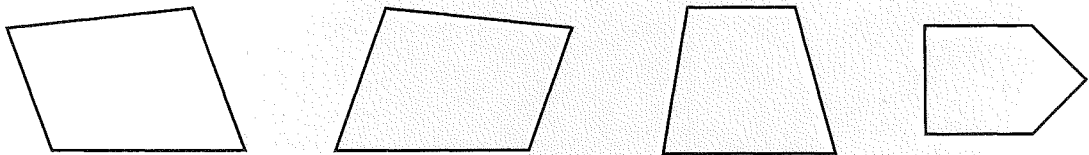


2. Sal wrote his name 3 times. Then he wrote his name 3 more times. Show how he wrote his name. Write a number sentence to show the number of times he wrote his name.

Number sentence \_\_\_\_\_

How many times did Sal write his name? \_\_\_\_\_ times

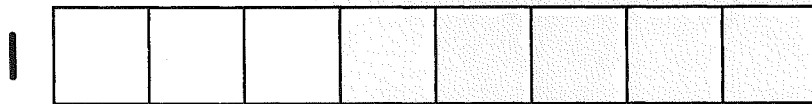
3. Circle the one that is different.



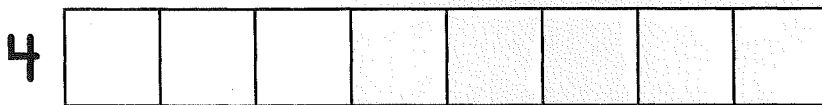
4. How many squares are in the first train? \_\_\_\_\_ squares

Color

How many are left?



\_\_\_\_\_



\_\_\_\_\_

5. Write the answers.

$5 + 1 = \underline{\quad}$

$\begin{array}{r} 0 \\ + 0 \\ \hline \end{array}$

$\begin{array}{r} 9 \\ + 9 \\ \hline \end{array}$

$\begin{array}{r} 1 \\ + 1 \\ \hline \end{array}$

$\begin{array}{r} 8 \\ + 8 \\ \hline \end{array}$

$\begin{array}{r} 2 \\ + 2 \\ \hline \end{array}$

$8 + 1 = \underline{\quad}$

Name \_\_\_\_\_

### Homework 37B

Math 1 (for use with Lesson 37)

1. Write the next 2 numbers you say when you count by 1's.


19, 20, 21, \_\_\_\_\_, \_\_\_\_\_

2. Write 4 letters of the alphabet. Now write 4 more letters. Write a number sentence to show the number of letters you wrote.

Number sentence \_\_\_\_\_

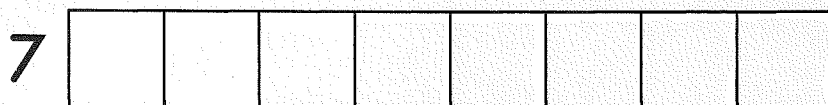
How many letters did you write? \_\_\_\_\_ letters

3. Circle the one that is different.



4. How many squares are in the first train? \_\_\_\_\_ squares

Color



How many are left?

\_\_\_\_\_

\_\_\_\_\_

5. Write the answers.

$6 + 1 =$ _____	$\begin{array}{r} 7 \\ + 1 \\ \hline \end{array}$	$\begin{array}{r} 4 \\ + 1 \\ \hline \end{array}$	$\begin{array}{r} 5 \\ + 1 \\ \hline \end{array}$	$\begin{array}{r} 3 \\ + 3 \\ \hline \end{array}$	$\begin{array}{r} 7 \\ + 7 \\ \hline \end{array}$
$0 + 1 =$ _____					