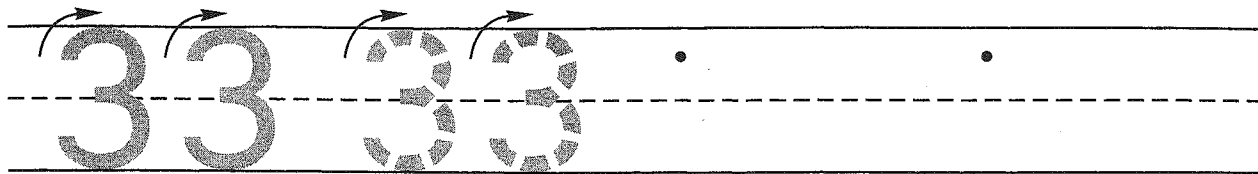


Name _____


Guided Class Practice 36A

Math 1 (for use with Lesson 36)

1. Trace the number thirty-three. Write the number thirty-three 2 more times.



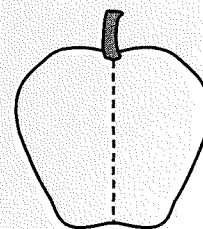
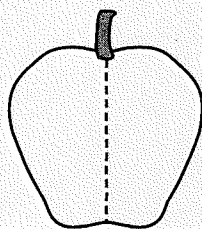
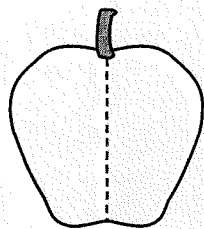
2. Eight children were in line. Three children returned to their seats. Draw a picture and write a number sentence to show the number of children in line now.



Number sentence _____

How many children are in line now? _____ children

3. Draw different ways to show 10 apple seeds.



$$\underline{\quad} + \underline{\quad} = \boxed{10}$$

$$\underline{\quad} + \underline{\quad} = \boxed{10}$$

$$\underline{\quad} + \underline{\quad} = \boxed{10}$$

4. Write the number that is one more.

4, _____

13, _____

22, _____

5. Write the answers.

$$\begin{array}{r} 0 \\ + 0 \\ \hline \end{array}$$

$$\begin{array}{r} 9 \\ + 9 \\ \hline \end{array}$$

$$\begin{array}{r} 1 \\ + 1 \\ \hline \end{array}$$

$$\begin{array}{r} 8 \\ + 8 \\ \hline \end{array}$$

$$\begin{array}{r} 2 \\ + 2 \\ \hline \end{array}$$

Name _____


Homework 36B

Math 1 (for use with Lesson 36)

1. Write the next 2 numbers you say when you count by 1's.

22, 23, 24, _____, _____

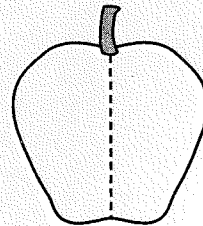
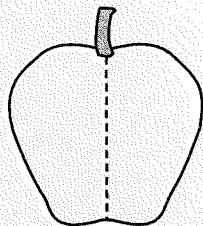
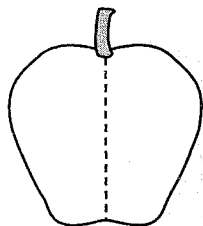
2. Five ducks were swimming in the pond. Two ducks flew away. Draw a picture and write a number sentence to show the number of ducks in the pond now.



Number sentence _____

How many ducks are in the pond now? _____ ducks

3. Draw different ways to show 9 apple seeds.



____ + ____ = 9

____ + ____ = 9

____ + ____ = 9

4. Write the number that is one more.

2, _____

17, _____

21, _____

5. Write the answers.

$$\begin{array}{r} 7 \\ + 7 \\ \hline \end{array}$$

$$\begin{array}{r} 3 \\ + 3 \\ \hline \end{array}$$

$$\begin{array}{r} 6 \\ + 6 \\ \hline \end{array}$$

$$\begin{array}{r} 4 \\ + 4 \\ \hline \end{array}$$

$$\begin{array}{r} 5 \\ + 5 \\ \hline \end{array}$$