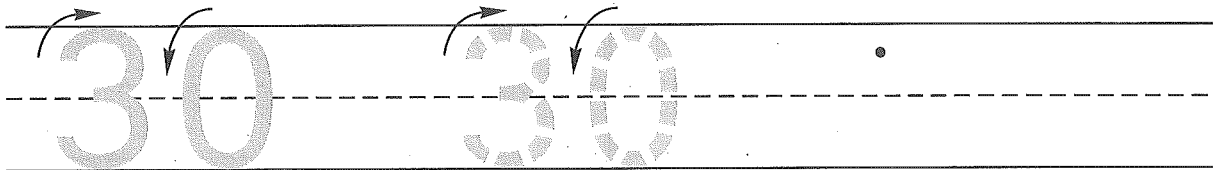



Name _____

1. Trace the number thirty. Write the number thirty 1 more time.



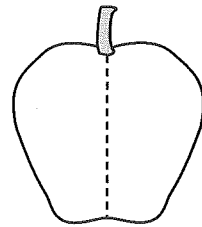
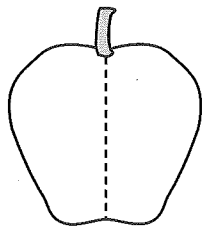
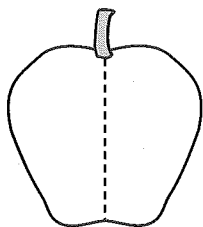
2. Marny put 4 crayons and 2 books on her desk. One crayon rolled off the desk. Draw a picture and write a number sentence to show the number of crayons on the desk now.



Number sentence _____

How many crayons are on the desk now? _____ crayons

3. Draw different ways to show 10 apple seeds.

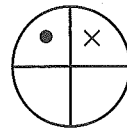
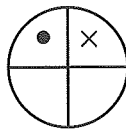
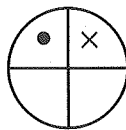
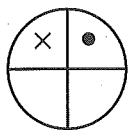


$$\underline{\quad} + \underline{\quad} = \boxed{10}$$

$$\underline{\quad} + \underline{\quad} = \boxed{10}$$

$$\underline{\quad} + \underline{\quad} = \boxed{10}$$

4. Circle the one that is different.



5. Write the answers.

$$\begin{array}{r} 1 \\ + 1 \\ \hline \end{array}$$

$$\begin{array}{r} 3 \\ + 3 \\ \hline \end{array}$$

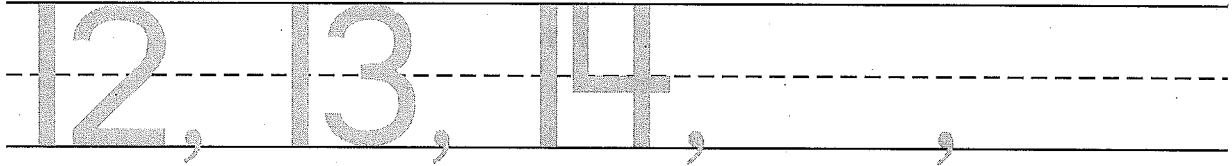
$$\begin{array}{r} 5 \\ + 5 \\ \hline \end{array}$$

$$\begin{array}{r} 7 \\ + 7 \\ \hline \end{array}$$

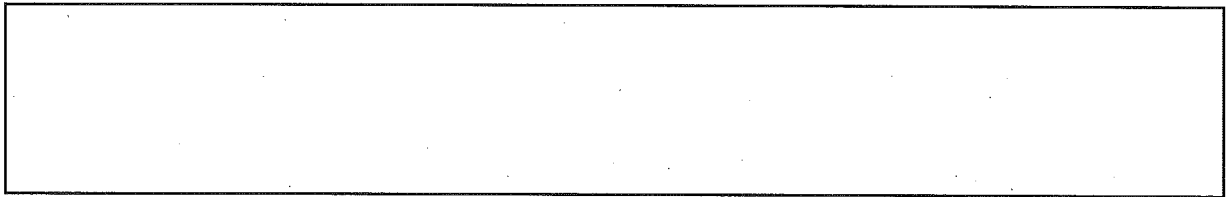
$$\begin{array}{r} 9 \\ + 9 \\ \hline \end{array}$$

Name _____

1. Write the next 2 numbers you say when you count.



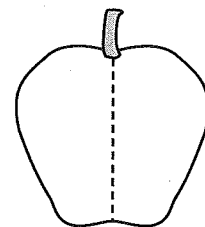
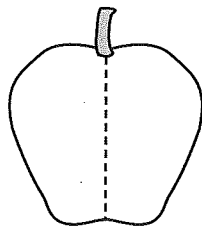
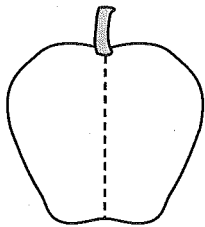
2. Sydney put 5 eggs and 2 pieces of toast on the kitchen counter. One egg rolled off the counter and broke. Draw a picture and write a number sentence to show the number of eggs on the counter now.



Number sentence _____

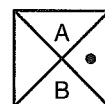
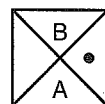
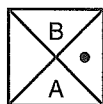
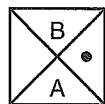
How many eggs are on the counter now? _____ eggs

3. Draw different ways to show 7 apple seeds.



___ + ___ = 7 ___ + ___ = 7 ___ + ___ = 7

4. Circle the one that is different.



5. Write the answers.

$$\begin{array}{r} 0 \\ + 0 \\ \hline \end{array}$$

$$\begin{array}{r} 2 \\ + 2 \\ \hline \end{array}$$

$$\begin{array}{r} 4 \\ + 4 \\ \hline \end{array}$$

$$\begin{array}{r} 6 \\ + 6 \\ \hline \end{array}$$

$$\begin{array}{r} 8 \\ + 8 \\ \hline \end{array}$$