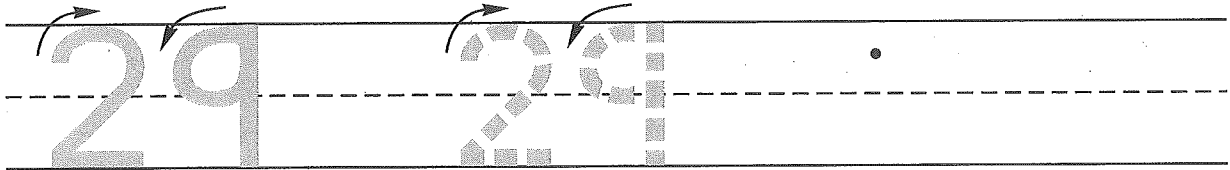



Name \_\_\_\_\_

1. Trace the number twenty-nine. Write the number twenty-nine 1 more time.



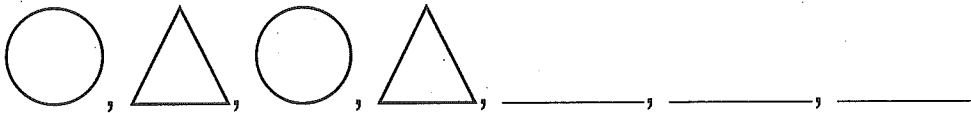
2. SaLeece had 7 stickers in her sticker book. Mrs. Haynes gave her 3 more stickers for her sticker book. Draw a picture and write a number sentence to show the number of stickers SaLeece has now.



Number sentence \_\_\_\_\_

How many stickers does SaLeece have now? \_\_\_\_\_ stickers


3. Finish this shape pattern.



4. How many squares are in the first train? \_\_\_\_\_ squares

Color.

How many are left? \_\_\_\_\_



5. Put an X in the top left-hand corner of this paper.

6. Write the answers.

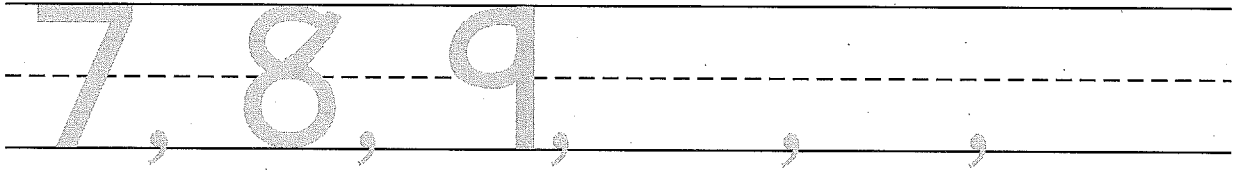
$3 + 3 = \underline{\quad}$

$9 + 9 = \underline{\quad}$


$7 + 7 = \underline{\quad}$

Name \_\_\_\_\_

1. Write the next 3 numbers you say when you count.



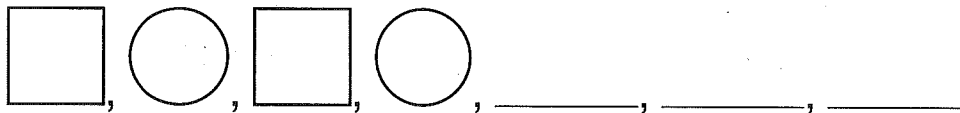
2. Tahj has 5 purple jelly beans and 6 green jelly beans. Draw a picture and write a number sentence to show the number of jelly beans Tahj has.



Number sentence \_\_\_\_\_

How many jelly beans does Tahj have now? \_\_\_\_\_ jelly beans


3. Finish this shape pattern.



4. How many squares are in the first train? \_\_\_\_\_ squares

Color.

How many are left? \_\_\_\_\_



5. Put an O in the bottom right-hand corner of this paper.

6. Write the answers.

$2 + 2 =$  \_\_\_\_\_

$6 + 6 =$  \_\_\_\_\_

$8 + 8 =$  \_\_\_\_\_