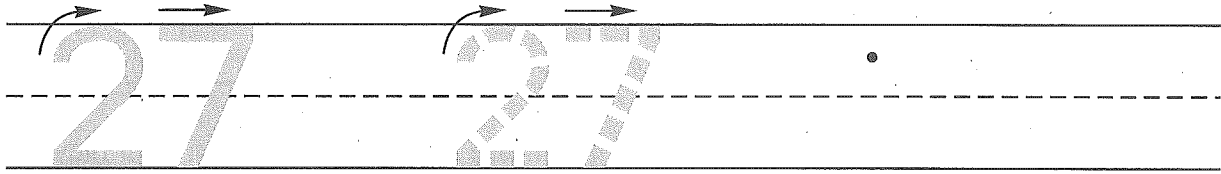



Name _____

1. Trace the number twenty-seven. Write the number twenty-seven 1 more time.



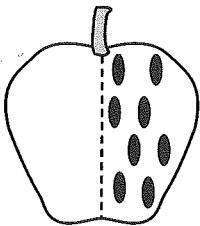
2. Four boys were playing soccer. Four more boys joined them to play soccer. Draw a picture of the boys and write a number sentence to show the number of boys playing soccer now.



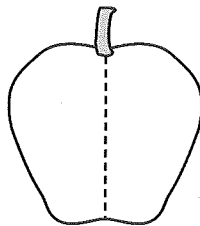
Number sentence _____

How many boys are playing soccer now? _____ boys

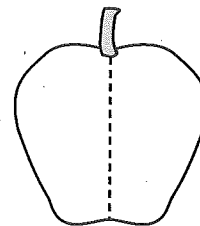
3. Write a number sentence for the first apple.
Now draw different ways to show 8 apple seeds in the last two apples.



$$\underline{\quad} + \underline{\quad} = \boxed{\quad}$$



$$\underline{\quad} + \underline{\quad} = \boxed{8}$$



$$\underline{\quad} + \underline{\quad} = \boxed{8}$$

4. Color.




How many are left?

Name _____

1. Fill in the missing numbers.



2. Three girls were riding their bicycles. Three more girls joined them on their bicycles. Draw a picture of the girls and write a number sentence to show the number of girls riding their bicycles now.

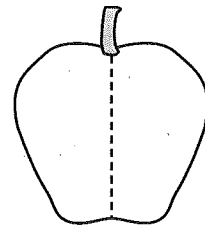
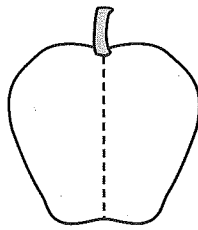
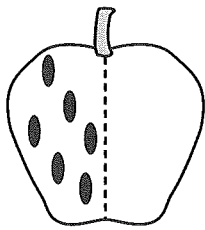


Number sentence _____

How many girls are riding bicycles now? _____ girls

3. Write a number sentence for the first apple.

Now draw different ways to show 6 apple seeds in the last two apples.



___ + ___ =

___ + ___ =

___ + ___ =

4. Color.

How many are left?

