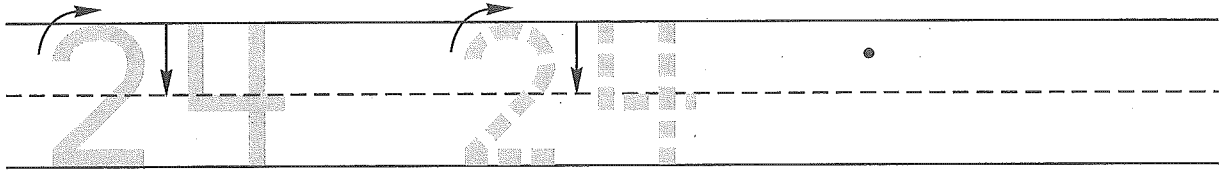



Name _____

1. Trace the number twenty-four. Write the number twenty-four 1 more time.



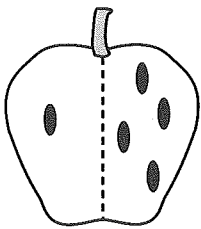
2. Debby had seven cats. Scot gave her another cat for her birthday. Draw a picture and write a number sentence to show the number of cats Debby has now.



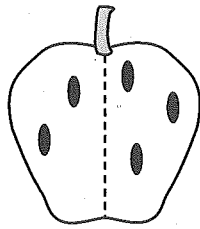
Number sentence _____

How many cats does Debby have now? _____ cats

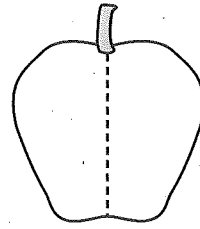
3. Write number sentences for the first two apples.
Now draw a different way to show 5 apple seeds in the last apple.
Hint: You can use 5 objects to help you do this.



___ + ___ =



___ + ___ =



___ + ___ =

4. Color.




How many are left?

Name _____

1. Fill in the missing numbers.

1		3		5		7		9	
---	--	---	--	---	--	---	--	---	--

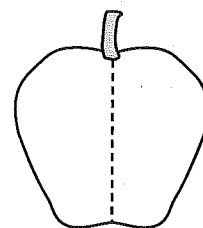
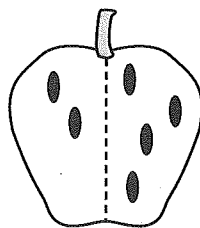
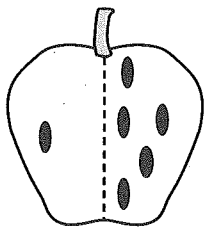
2. Rebecca had five fish in her fish tank. She bought three more fish. Draw a picture and write a number sentence to show how many fish she has now.



Number sentence _____

How many fish does Rebecca have now? _____ fish

3. Write number sentences for the first two apples.
Now draw a different way to show 6 apple seeds in the last apple.
Hint: You can use 6 objects to help you do this.




___ + ___ =

___ + ___ =

___ + ___ =

4. Color.



How many are left?
