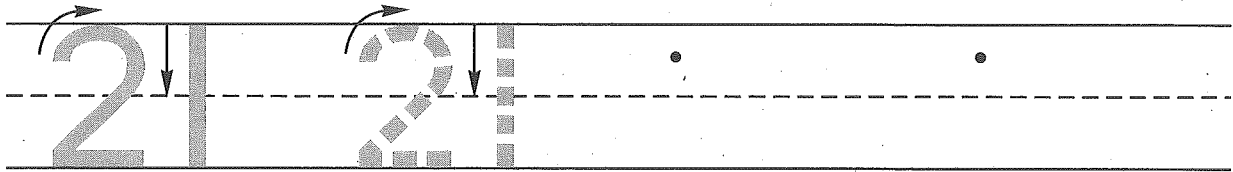



Name _____

1. Trace the number twenty-one. Write the number twenty-one 2 more times.

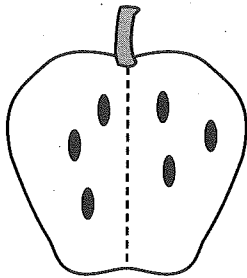


2. There were 4 ants on the table. Three more ants climbed onto the table. Draw a picture to show what happened.

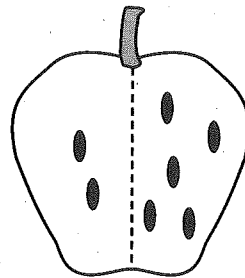


How many ants are on the table now? _____ ants

3. Write number sentences for these apples.



___ + ___ =



___ + ___ =

4. Write the answers.

$0 + 0 =$ _____

$1 + 1 =$ _____

$2 + 2 =$ _____

$3 + 3 =$ _____

$4 + 4 =$ _____

$5 + 5 =$ _____

5. Fill in the missing numbers.

1	2	3		5	6				10
11	12		14			17	18	19	

Name _____

1. When we count, what number is between 2 and 4? _____

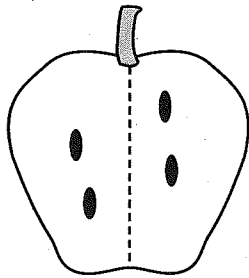
Practice writing that number.

2. There were 6 ants on the table. Four more ants climbed onto the table.

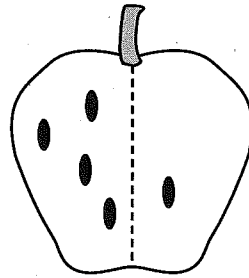
Draw a picture to show what happened.

How many ants are on the table now? _____ ants

3. Write number sentences for these apples.



___ + ___ =



___ + ___ =

4. Write the answers.

$5 + 5 =$ _____

$2 + 2 =$ _____

$3 + 3 =$ _____

$0 + 0 =$ _____

$4 + 4 =$ _____

$1 + 1 =$ _____

5. Fill in the missing numbers.

1		3		5		7		9	
11		13		15		17		19	