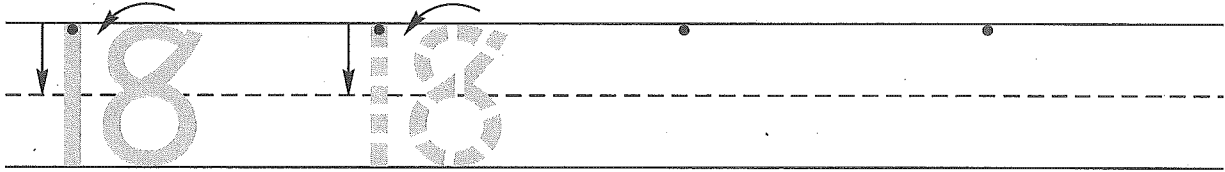



Name \_\_\_\_\_

1. Trace the number eighteen. Write the number eighteen 2 more times.

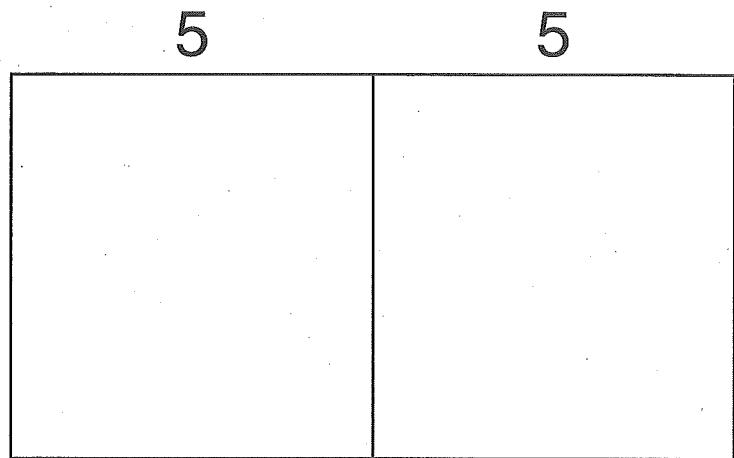


2. Juan found 5 seeds in his apple. Then he found 2 more.  
Draw a picture to show what happened.




How many seeds did Juan find in his apple? \_\_\_\_\_ seeds

3. Draw 5 pennies in each square.



How many pennies is that altogether? \_\_\_\_\_ pennies

4. Draw 3 seeds in the **first** apple.  
Draw 4 seeds in the **third** apple.  
Draw 2 seeds in the **second** apple.  
Circle the apple with the most seeds.



Name \_\_\_\_\_

1. When we count, what number is between 7 and 9? \_\_\_\_\_  
Practice writing that number.

\_\_\_\_\_

-----

\_\_\_\_\_

2. Jennifer found 4 seeds in her apple. Then she found 4 more.  
Draw a picture to show what happened.

\_\_\_\_\_

How many seeds did Jennifer find in her apple? \_\_\_\_\_ seeds

3. Draw 2 pennies in each square.

2                      2

--	--

How many pennies is that altogether? \_\_\_\_\_ pennies

4. Draw 3 seeds in the **first** apple.  
Draw 1 seed in the **third** apple.  
Draw 5 seeds in the **second** apple.  
Circle the apple with the most seeds.

