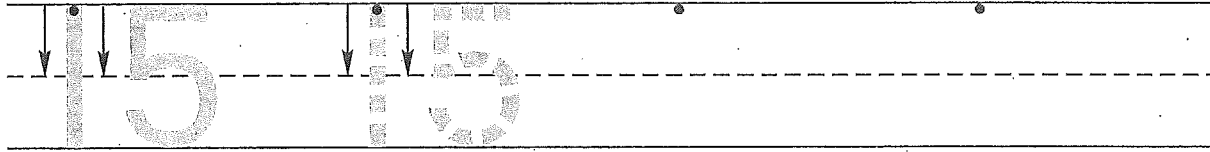



Name \_\_\_\_\_

1. Trace the number fifteen. Write the number fifteen 2 more times.




2. Alex had three crackers. Draw the crackers. His sister gave him two more crackers. Draw a picture to show the crackers his sister gave him.



How many crackers does Alex have now? \_\_\_\_\_ crackers

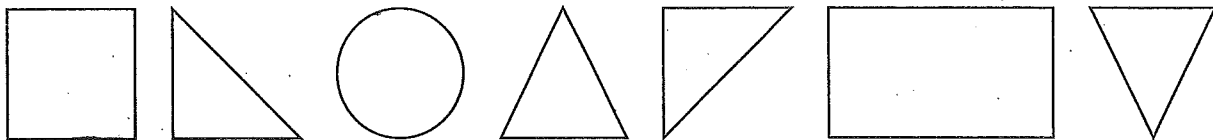
3. Color the pennies brown.  
How many pennies did you color? \_\_\_\_\_ pennies



4. Put an X on the **third** penny.  
Circle the **second** penny.

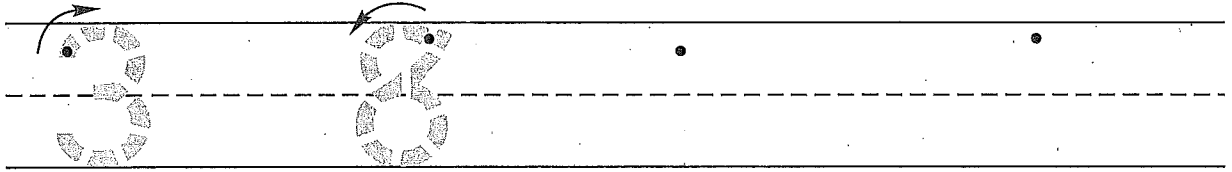
5. Triangles have \_\_\_\_\_ sides.

6. Color the triangles red.




Name \_\_\_\_\_

1. Write the numbers.




2. Janis had four pencils. Draw a picture of the pencils. Her brother gave her one more pencil. Draw the pencil her brother gave her.



How many pencils does Janis have now? \_\_\_\_\_ pencils

3. Color the pennies brown.

How many pennies did you color? \_\_\_\_\_ pennies



4. Put an X on the **first** penny.

Circle the **last** penny.

5. Triangles have \_\_\_\_\_ sides.

6. Color the triangles red.

