

Name _____

(Draw a 2-inch line segment for your name.)

Date _____

Day of the Week _____

Tally marks

- Write the number one hundred twenty-one on the place value chart.

Hundreds	Tens	Ones


Which digit is in the tens' place? _____

- There are 9 girls and 8 boys in Room 4. Six girls went to the library. How many of the girls are in Room 4 now?


Number sentence _____

Answer _____ girls

- How many pennies are shown? _____ pennies



- How much money is this? _____



- Write an addition and subtraction fact family using the numbers 4, 5, and 9.

- Find the answers.

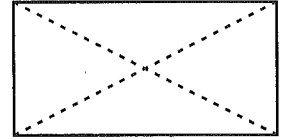
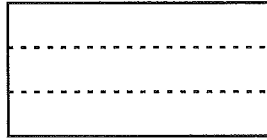

$62 - 10 = \underline{\quad}$

$75 - 10 = \underline{\quad}$

$8 + 4 + 6 = \underline{\quad}$

Name _____

1. A third is one of three equal parts. Circle the rectangle that is divided into thirds.




2. There are 9 girls and 8 boys in Room 4. Three boys went to the library. How many of the boys are in Room 4 now?


Number sentence _____

Answer _____ boys

3. How many pennies are shown? _____ pennies



4. How much money is this? _____



5. Write an addition and subtraction fact family using the numbers 3, 6, and 9.

6. Find the answers.

$94 - 10 = \underline{\hspace{2cm}}$

$25 - 10 = \underline{\hspace{2cm}}$

$6 + 3 + 7 = \underline{\hspace{2cm}}$