

Name _____

(Draw a 7-centimeter line segment for your name.)

Date _____

Day of the Week _____

Tally marks

Hundreds	Tens	Ones

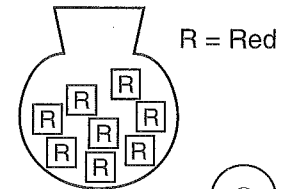
1. Write the number one hundred twenty on the place value chart.

Which digit is in the tens' place? _____

2. I will take one cube from the bag without looking in the bag.

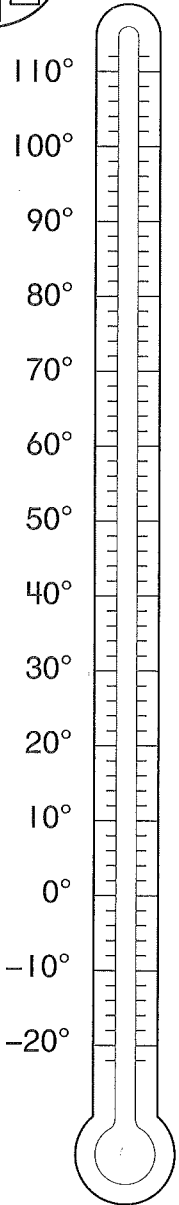
What color am I certain to get? _____

What color is it impossible for me to get?




3. Color the thermometer to show 40°F.

4. Write a story for the number sentence $9 - 4 = 5$.
- _____
- _____
- _____



5. How many pennies are shown?

_____ pennies



6. Find the answers.

$$\begin{array}{r} 72\text{¢} \\ + 26\text{¢} \\ \hline \end{array}$$

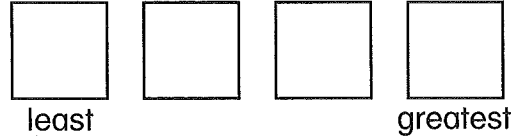
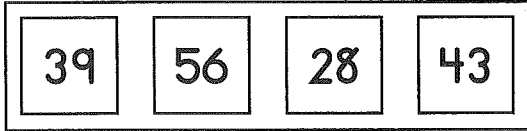
$$\begin{array}{r} 67\text{¢} \\ - 20\text{¢} \\ \hline \end{array}$$

$$\begin{array}{r} 38\text{¢} \\ + 61\text{¢} \\ \hline \end{array}$$

$$\begin{array}{r} 46\text{¢} \\ - 3\text{¢} \\ \hline \end{array}$$

Name _____

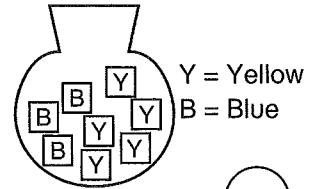
1. Put these number cards in order from least to greatest.



2. I will take one cube from the bag without looking in the bag.

What color am I most likely to get? _____

What color is it impossible for me to get?

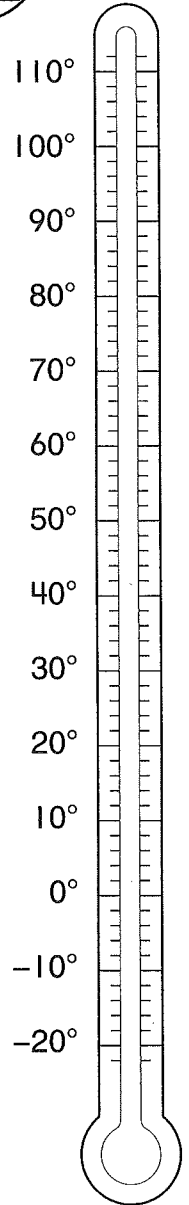



3. Color the thermometer to show 70°F.

4. Write a story for the number sentence $9 - 3 = 6$.

5. How many pennies are shown?

_____ pennies



6. Find the answers.

$$\begin{array}{r} 44\text{¢} \\ + 53\text{¢} \\ \hline \end{array}$$

$$\begin{array}{r} 72\text{¢} \\ - 12\text{¢} \\ \hline \end{array}$$

$$\begin{array}{r} 35\text{¢} \\ + 4\text{¢} \\ \hline \end{array}$$

$$\begin{array}{r} 66\text{¢} \\ - 53\text{¢} \\ \hline \end{array}$$

This page may not be reproduced without permission of Harcourt Achieve Inc.