

Name \_\_\_\_\_  
 (Draw a 3-inch line segment for your name.)

Date \_\_\_\_\_

Day of the Week \_\_\_\_\_

Tally marks

1. Write the number one hundred eighteen on the place value chart.

Hundreds	Tens	Ones

Circle the digit that tells the number of 10's.

2. What temperature is shown on the thermometer? \_\_\_\_\_°F

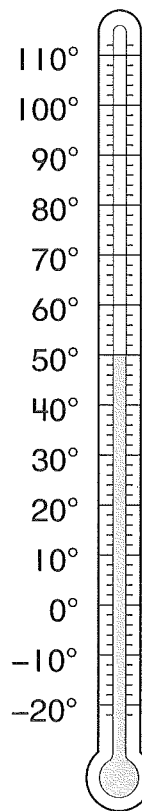
3. Write a some, some went away story problem using the numbers 9 and 2.

\_\_\_\_\_

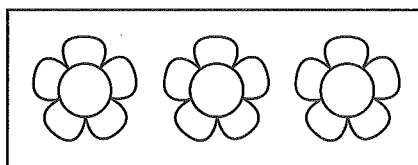
\_\_\_\_\_

\_\_\_\_\_

Write a number sentence for your story. \_\_\_\_\_




4. Color two flowers red.  
 Color one flower yellow.



\_\_\_\_\_ out of \_\_\_\_\_ flowers are red

5. How many pennies are shown? \_\_\_\_\_ pennies



6. Find the answers.

$$\begin{array}{r} 75\text{¢} \\ - 14\text{¢} \\ \hline \end{array}$$

$$\begin{array}{r} 53\text{¢} \\ + 6\text{¢} \\ \hline \end{array}$$

$$\begin{array}{r} 87\text{¢} \\ - 42\text{¢} \\ \hline \end{array}$$

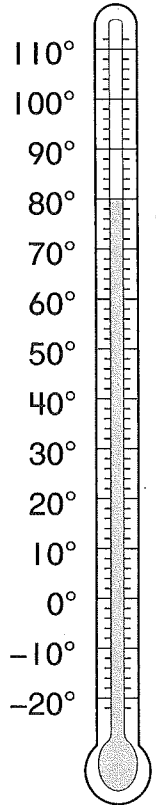
$$\begin{array}{r} 21\text{¢} \\ + 32\text{¢} \\ \hline \end{array}$$

Name \_\_\_\_\_

1. Circle all the numbers that are between 52 and 75.

58      82      69      51      71      48

2. What temperature is shown on the thermometer? \_\_\_\_\_°F



3. Write a some, some went away story problem using the numbers 6 and 2.

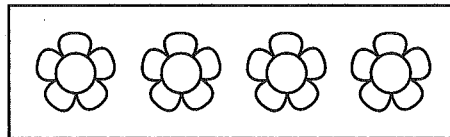
\_\_\_\_\_

\_\_\_\_\_

\_\_\_\_\_


Write a number sentence for your story. \_\_\_\_\_

4. Color one flower red.  
Color three flowers yellow.



\_\_\_\_\_ out of \_\_\_\_\_ flowers is red

5. How many pennies are shown? \_\_\_\_\_ pennies



6. Find the answers.

$$\begin{array}{r} 68\text{¢} \\ - 21\text{¢} \\ \hline \end{array}$$

$$\begin{array}{r} 70\text{¢} \\ + 29\text{¢} \\ \hline \end{array}$$

$$\begin{array}{r} 86\text{¢} \\ - 73\text{¢} \\ \hline \end{array}$$

$$\begin{array}{r} 32\text{¢} \\ + 7\text{¢} \\ \hline \end{array}$$