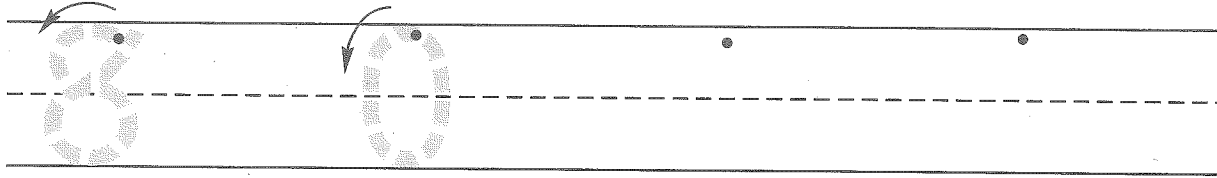


Name _____


1. Write the numbers.



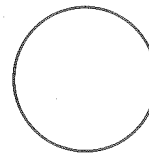
2. Point to the middle tower.
How many squares are shaded?
Write the answer in the circle
below the tower.

Point to the tower on the left.
Color fewer squares than the
tower in the middle. Write the
number of squares you colored
on the line below the tower.

Point to the tower on the right.
Color more squares than the
tower in the middle. Write the
number of squares you colored
on the line below the tower.



_____ Fewer



_____ More

3. Write a **4** on the last line.
Write an **8** on the first line.
Write a **0** on the middle line.

Parent: Ask your child to count as high as he or she can.

Last correct number: _____