

Name \_\_\_\_\_

(Draw an 8-centimeter line segment for your name.)

**Guided Class Practice 121A**

*Saxon Math 1 (for use with Lesson 121)*

Date \_\_\_\_\_

Day of the Week \_\_\_\_\_

Tally  
marks

- Write the number one hundred nine on the place value chart.

Hundreds	Tens	Ones

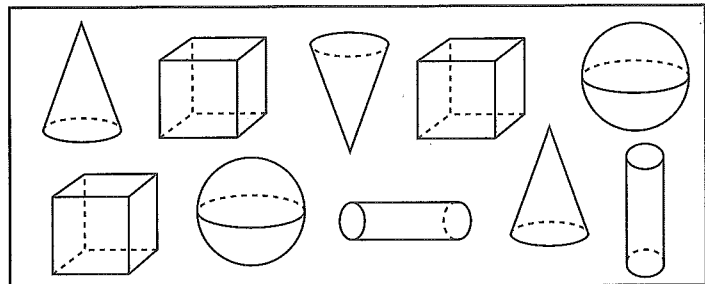
Circle the digit that tells the number of 10's.

- Colette had 7 pencils and 3 erasers. She gave Steven 2 pencils. Draw a picture and write a number sentence to show how many pencils she has now.

Number sentence \_\_\_\_\_

How many pencils does Colette have now? \_\_\_\_\_ pencils

- Color the cubes green.  
Color the cylinders orange.




- Color the graph to show how many cubes and cylinders you colored.

Cubes							
Cylinders							

How many more cubes than cylinders did you color? \_\_\_\_\_

- Color the pennies brown. How much money is this? \_\_\_\_\_



- Find the answers.

$6 + 1 + 6 = \underline{\hspace{2cm}}$

$3 + 5 + 7 = \underline{\hspace{2cm}}$

Name \_\_\_\_\_


1. Write the number that is 10 more than each number.

5, \_\_\_\_\_

24, \_\_\_\_\_

73, \_\_\_\_\_

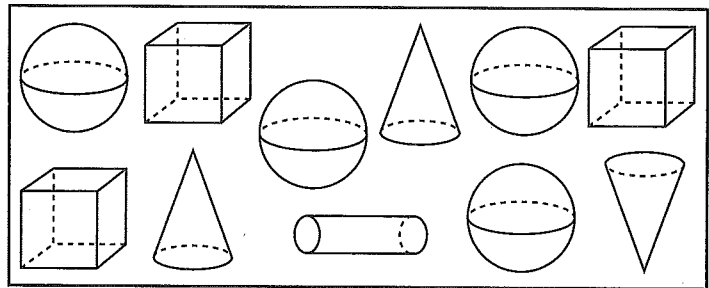
2. Dana had 6 markers and 2 pencils. She gave her brother Josh 3 markers. Draw a picture and write a number sentence to show how many markers she has now.



Number sentence \_\_\_\_\_

How many markers does Dana have now? \_\_\_\_\_ markers

3. Color the cubes green.  
Color the cylinders orange.




4. Color the graph to show how many cubes and cylinders you colored.

Cubes						
Cylinders						

How many more cubes than cylinders did you color? \_\_\_\_\_

5. Color the pennies brown. How much money is this? \_\_\_\_\_



6. Find the answers.

$4 + 3 + 6 =$  \_\_\_\_\_

$2 + 1 + 8 =$  \_\_\_\_\_