

Name _____

(Draw a 3-inch line segment for your name.)

Date _____

Day of the Week _____

Tally marks

1. Write the number one hundred six on the place value chart.

Hundreds	Tens	Ones

Circle the digit that tells the number of 10's.

2. Fill in the next three shapes and numbers on the calendar.

What is the date of the first Monday in May?

What is the date of the second Friday in May?

May

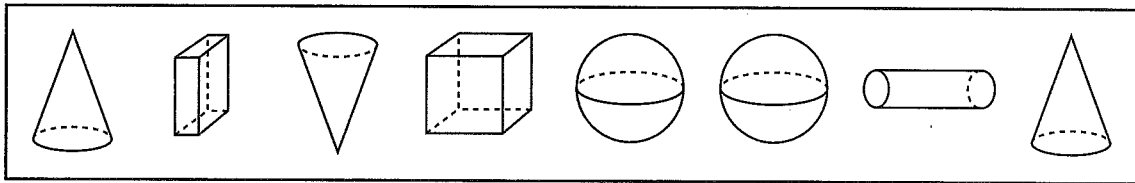
Sunday	Monday	Tuesday	Wednesday	Thursday	Friday	Saturday
			1	2	3	4
5	6	7	8	9	10	11
12	13					

3. The celery is cut into how many equal pieces? _____
Color two of the pieces.



_____ out of _____ pieces are colored.

4. Color the cones blue. Color the spheres red.



5. Color the graph to show how many cones and spheres you colored.

Cones							
Spheres							

How many more cones than spheres did you color? _____

6. Find the answers.

$9 + 2 + 3 = \underline{\quad}$

$5 + 8 + 2 = \underline{\quad}$

Name _____

1. Circle all the numbers that are between 42 and 55.

41 59 47 21 53 43 56

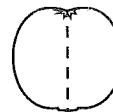
2. Fill in the next three shapes and numbers on the calendar.

What is the date of the first Thursday in April?

What is the date of the second Wednesday in April?

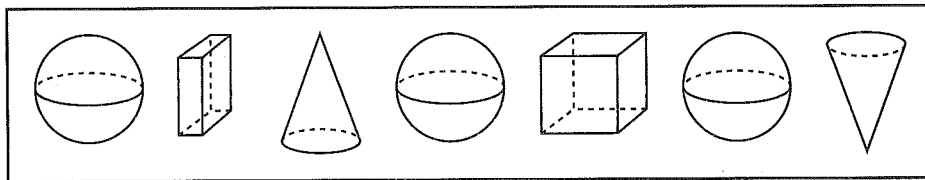
April						
Sunday	Monday	Tuesday	Wednesday	Thursday	Friday	Saturday
		1	2	3	4	5
6	7	8	9	10	11	12
13	14	15				

3. The tomato is cut into how many equal pieces? _____
Color one of the pieces.



_____ out of _____ pieces are colored.

4. Color the cones blue. Color the spheres red.



5. Color the graph to show how many cones and spheres you colored.

How many more spheres than cones did you color? _____

Cones						
Spheres						

6. Find the answers.

$6 + 2 + 2 = \underline{\hspace{2cm}}$

$7 + 1 + 7 = \underline{\hspace{2cm}}$