

Name \_\_\_\_\_

(Draw a 2-inch line segment for your name.)

Date \_\_\_\_\_

Day of the Week \_\_\_\_\_

Tally  
marks

- Write the number one hundred one on the place value chart.

Hundreds	Tens	Ones

Circle the digit that tells the number of 100's.

- Evie read 21 pages of her book on Monday. On Tuesday she read 10 more pages. What kind of story is this?

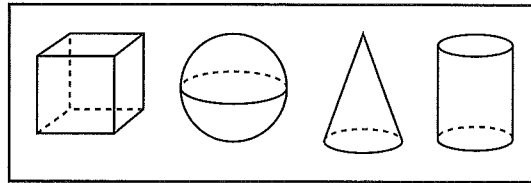
some, some more      some, some went away

Write a number sentence to find how many pages she read altogether.

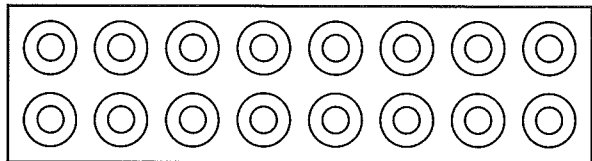
Number sentence \_\_\_\_\_

How many pages did she read altogether? \_\_\_\_\_ pages

- Color the cone blue.  
Color the sphere red.



- Circle a dozen doughnuts.  
Color a half dozen brown to show that they are chocolate.



- Use the classroom calendar to answer these questions.

What was the date of the first Tuesday of this month? \_\_\_\_\_

What was yesterday's date? \_\_\_\_\_

What day of the week will it be tomorrow? \_\_\_\_\_

- Find the answers.

$59 + 10 = \underline{\hspace{2cm}}$

$74 + 10 = \underline{\hspace{2cm}}$

$16 + 10 = \underline{\hspace{2cm}}$

- Fill in the correct comparison symbol (>, <, or =).

12 ○ 2

24 ○ 25

9 ○ 9

Name \_\_\_\_\_

1. Write the numbers that are one less and one more than each number.

\_\_\_\_\_, 19, \_\_\_\_\_      \_\_\_\_\_, 40, \_\_\_\_\_

2. Curtis read 36 pages of his book on Saturday. On Sunday he read 10 more pages. What kind of story is this?

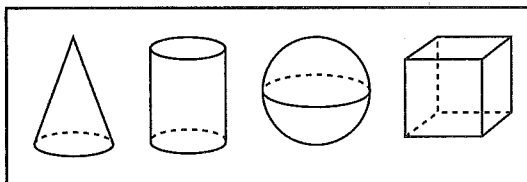
some, some more      some, some went away

Write a number sentence to find how many pages he read altogether.

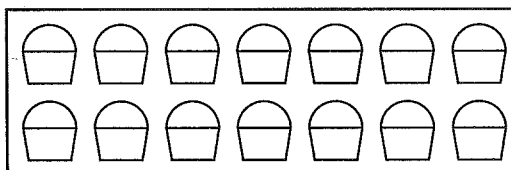
Number sentence \_\_\_\_\_

How many pages did he read altogether? \_\_\_\_\_ pages

3. Color the cone blue.  
Color the sphere red.



4. Circle a dozen cupcakes.  
Color a half dozen brown to show that they are chocolate.



5. What will be the date tomorrow? \_\_\_\_\_

6. Find the answers.

$62 + 10 = \underline{\hspace{2cm}}$

$36 + 10 = \underline{\hspace{2cm}}$

$11 + 10 = \underline{\hspace{2cm}}$

7. Fill in the correct comparison symbol (>, <, or =).

7 ○ 7

2 ○ 11

45 ○ 41

This page may not be reproduced without permission of Harcourt Achieve Inc.