

Name _____

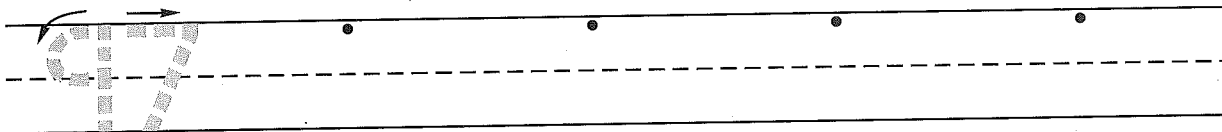
(Draw a 2-inch line segment for your name.)

Date _____

Day of the Week _____

Tally
marks

1. Write the number ninety-seven 4 more times. How many digits are on the line? _____

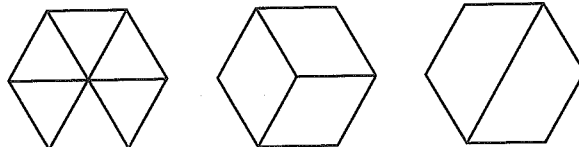


2. Daniel wrote five adding 9 facts. Then he wrote three more adding 9 facts. Show the facts he wrote. Write a number sentence to show how many adding 9 facts Daniel wrote.


Number sentence _____

How many adding 9 facts is that? _____ adding 9 facts

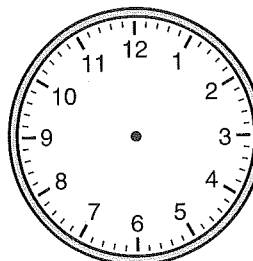

3. Point to the cake that is divided into halves.
Color one half of the cake red.
Point to the cake that is divided into thirds.
Color one third of the cake blue.
Point to the cake that is divided into sixths.
Color one sixth of the cake green.



4. Color the pennies brown. How much money is this? _____



5. Show half past twelve on both clocks.



Name _____

1. Fill in the missing numbers.

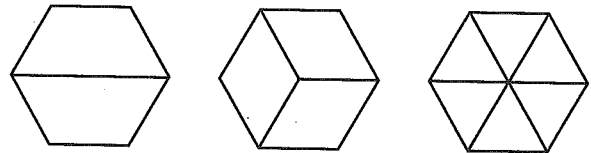
81									90
91									100

2. Cathy wrote four adding 9 facts. Then she wrote two more adding 9 facts. Show the facts she wrote. Write a number sentence to show how many adding 9 facts Cathy wrote.

Number sentence _____

How many adding 9 facts is that? _____ adding 9 facts

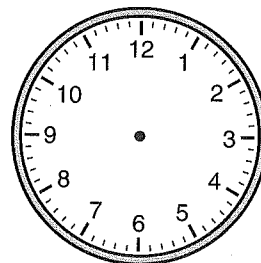
3. Point to the cake that is divided into sixths.
 Color one sixth of the cake green.
 Point to the cake that is divided into thirds.
 Color one third of the cake blue.
 Point to the cake that is divided into halves.
 Color one half of the cake red.



4. Color the pennies brown. How much money is this? _____



5. Show half past two on both clocks.



This page may not be reproduced without permission of Harcourt Achieve Inc.