

Name _____

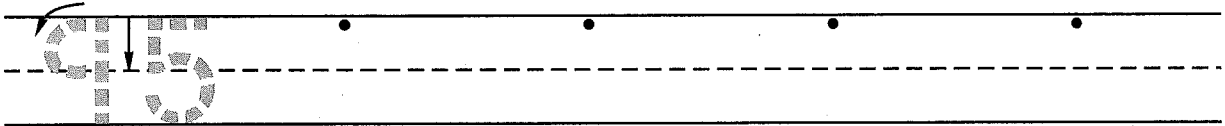
(Draw a 3-inch line segment for your name.)

Date _____

Day of the Week _____

Tally
marks

1. Write the number ninety-five 4 more times. How many digits are on the line? _____



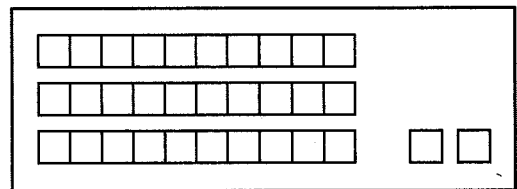
2. Billy's dad made a dozen muffins for breakfast. Billy's family ate ten muffins. Draw a picture and write a number sentence to show what happened.



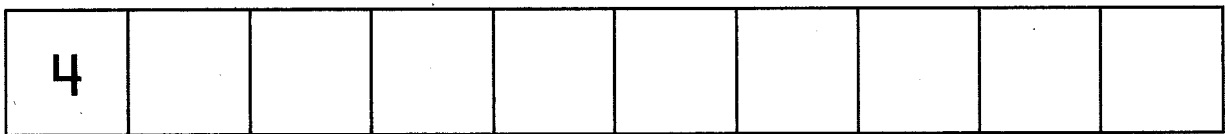
Number sentence _____

How many muffins are left? _____ muffins

3. Jennifer put the linking cubes in trains of 10.
How many linking cubes
does she have altogether? _____ linking cubes



4. Count by 10's from 4.



5. Write the answers.

$$\begin{array}{r} 6 \\ + 10 \\ \hline \end{array}$$

$$\begin{array}{r} 6 \\ + 9 \\ \hline \end{array}$$

$$\begin{array}{r} 4 \\ + 10 \\ \hline \end{array}$$

$$\begin{array}{r} 4 \\ + 9 \\ \hline \end{array}$$

$$\begin{array}{r} 7 \\ + 10 \\ \hline \end{array}$$

$$\begin{array}{r} 7 \\ + 9 \\ \hline \end{array}$$

6. Work with a partner to measure the distance from the floor to the doorknob of your classroom door.
About how many feet from the floor is the doorknob? _____ feet

Name _____


1. Write the number that is one more than each number.

9, _____

17, _____

26, _____

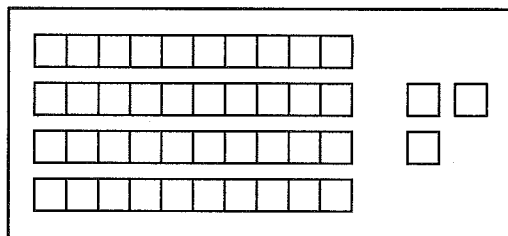
2. Jessie's mom poured a dozen glasses of orange juice. The children drank nine glasses of juice. Draw a picture and write a number sentence to show what happened.



Number sentence _____

How many glasses of juice are left? _____ glasses of juice

3. Walter put the linking cubes in trains of 10.
How many linking cubes
does he have altogether? _____ linking cubes



4. Count by 10's from 3.



5. Write the answers.

$$\begin{array}{r} 5 \\ + 10 \\ \hline \end{array}$$

$$\begin{array}{r} 5 \\ + 9 \\ \hline \end{array}$$

$$\begin{array}{r} 3 \\ + 10 \\ \hline \end{array}$$

$$\begin{array}{r} 3 \\ + 9 \\ \hline \end{array}$$

$$\begin{array}{r} 8 \\ + 10 \\ \hline \end{array}$$

$$\begin{array}{r} 8 \\ + 9 \\ \hline \end{array}$$

6. Measure the length of your bed from the head of the bed to the foot of the bed.
About how many feet long is your bed? _____ feet