

Name \_\_\_\_\_

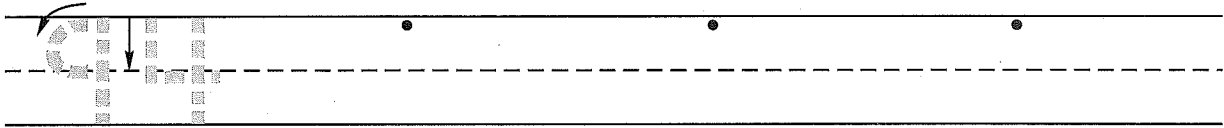
(Draw a 3-inch line segment for your name.)

Date \_\_\_\_\_

Day of the Week \_\_\_\_\_

Tally marks

1. Write the number ninety-four 3 more times. How many digits are on the line? \_\_\_\_\_




2. On Tuesday Cerina counted eight fish in the fish tank. Mrs. O'Connor put two more fish in the tank on Wednesday. What type of story is this?

some, some more

some, some went away

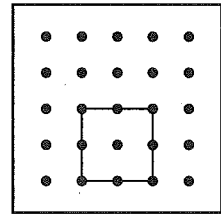
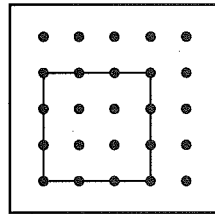
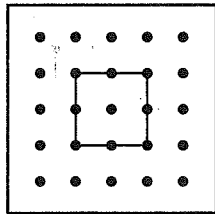
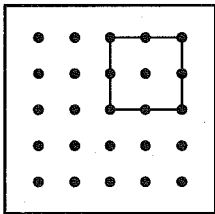
Draw a picture and write a number sentence to show how many fish are in the tank now.



Number sentence \_\_\_\_\_

How many fish are in the tank now? \_\_\_\_\_ fish

3. Circle the geoboard shape that is not congruent to the others.



4. Write six different problems with a sum of 10.

$\square$	$\square$	$\square$	$\square$	$\square$	$\square$
$\square$	$\square$	$\square$	$\square$	$\square$	$\square$
+	+	+	+	+	+
$\square$	$\square$	$\square$	$\square$	$\square$	$\square$
-----	-----	-----	-----	-----	-----
10	10	10	10	10	10

5. Use your ruler to measure something in the classroom that is about 1 foot long.

What did you measure? \_\_\_\_\_

Name \_\_\_\_\_

1. Finish these number patterns.

10, 12, 14, \_\_\_\_\_, \_\_\_\_\_, \_\_\_\_\_

34, 33, 32, \_\_\_\_\_, \_\_\_\_\_, \_\_\_\_\_, \_\_\_\_\_, \_\_\_\_\_

100, 200, 300, \_\_\_\_\_, \_\_\_\_\_, \_\_\_\_\_, \_\_\_\_\_, \_\_\_\_\_

2. On Thursday Roger counted seven stickers on the chart. Mrs. Keenan put two more stickers on the chart on Friday. What type of story is this?

some, some more

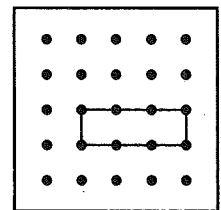
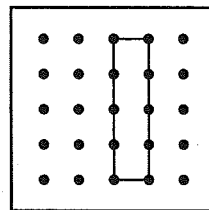
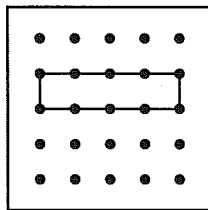
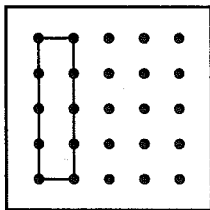
some, some went away

Draw a picture and write a number sentence to show how many stickers are on the chart now.

Number sentence \_\_\_\_\_

How many stickers are on the chart now? \_\_\_\_\_ stickers

3. Circle the geoboard shape that is not congruent to the others.



4. Fill in the missing numbers.

$$\begin{array}{r} \square \\ + 4 \\ \hline 10 \end{array}$$

$$\begin{array}{r} 3 \\ + \square \\ \hline 10 \end{array}$$

$$\begin{array}{r} \square \\ + 8 \\ \hline 10 \end{array}$$

$$\begin{array}{r} \square \\ + 1 \\ \hline 10 \end{array}$$

$$\begin{array}{r} 5 \\ + \square \\ \hline 10 \end{array}$$

$$\begin{array}{r} 7 \\ + \square \\ \hline 10 \end{array}$$

5. Use your ruler to measure something at home that is about 1 foot long.

What did you measure? \_\_\_\_\_

This page may not be reproduced without permission of Harcourt Achieve Inc.