

Name _____

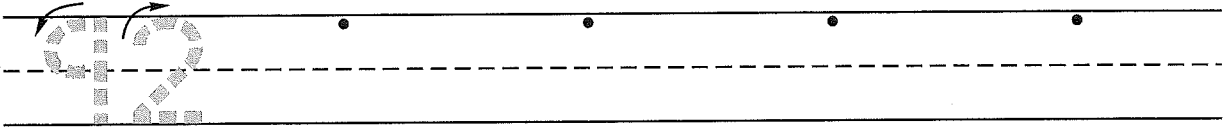
(Draw a 2-inch line segment for your name.)

Date _____


Day of the Week _____

Tally
marks

1. Write the number ninety-two 4 more times. How many digits are on the line? _____



2. Mark had seven pet frogs. He gave two frogs to Christopher. Draw a picture and write a number sentence to show how many frogs Mark has now.



Number sentence _____

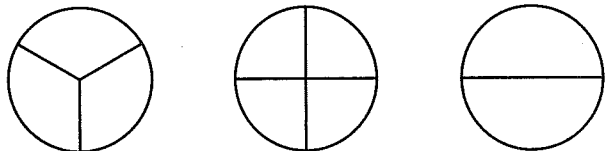
How many frogs does Mark have now? _____ frogs

3. Color the pennies brown. How much money is this? _____



4. Circle the shape that is divided into fourths. Color one fourth red.

Put an **X** below the shape divided into halves. Color one half blue.



5. Brendan bought milk for 43¢ and cereal for 26¢ at the classroom store. Show how he filled out the receipt.

	dimes	pennies	
milk	<input type="text"/>	<input type="text"/>	¢
cereal	+	<input type="text"/>	¢
<hr/>			
Total	<input type="text"/>	<input type="text"/>	¢

Name _____

1. Circle the number that is between 25 and 35.

23

27

36


42

2. Roxanne's dog had six puppies. She gave two puppies to Teresa. Draw a picture and write a number sentence to show how many puppies Roxanne has now.

Number sentence _____

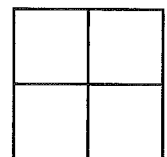
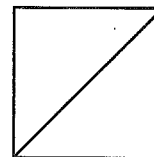
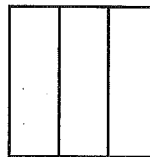
How many puppies does Roxanne have now? _____ puppies

3. Color the pennies brown. How much money is this? _____



4. Circle the shape that is divided into fourths. Color one fourth red.

Put an X below the shape divided into halves. Color one half blue.



5. Rondo bought bread for 31¢ and jelly for 28¢ at the classroom store. Show how he filled out the receipt.

	dimes	pennies	
bread	<input type="text"/>	<input type="text"/>	¢
jelly	+	<input type="text"/>	¢
<hr/>			
Total	<input type="text"/>	<input type="text"/>	¢