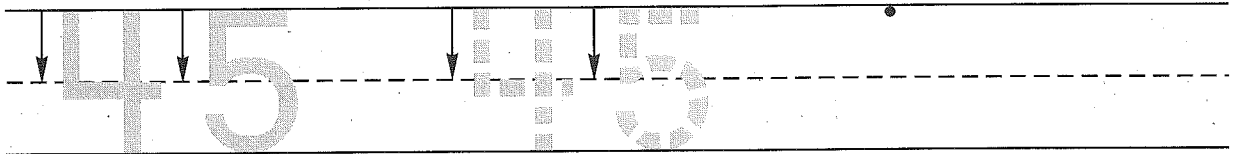


Name _____


Date _____

Day of the Week _____

1. Trace the number forty-five. Write the number forty-five 1 more time.



2. Ten children were standing in line. Two children sat down. Draw a picture and write a number sentence to show how many children are standing in line now.



Number sentence _____

How many children are standing in line now? _____ children

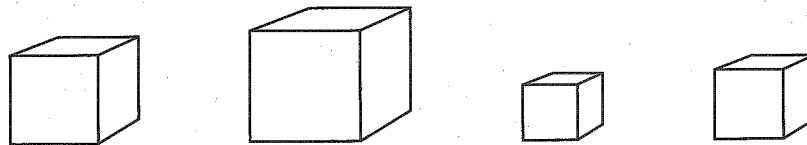
3. Use the graph to answer the questions.

How many sunny days were there? _____

How many cloudy and snowy days were there altogether? _____

Sunny							
Cloudy							
Snowy							

4. Color the largest cube green.
Color the smallest cube yellow.



5. Write the number that is one more.

8, _____

15, _____

23, _____

Name _____

1. Circle the number in the box that is between 18 and 22 when you count by 1's.

18 _____ 22

23	15	19
----	----	----

2. Eight children were standing in line. Four children sat down. Draw a picture and write a number sentence to show how many children are standing in line now.













Number sentence _____

How many children are standing in line now? _____ children

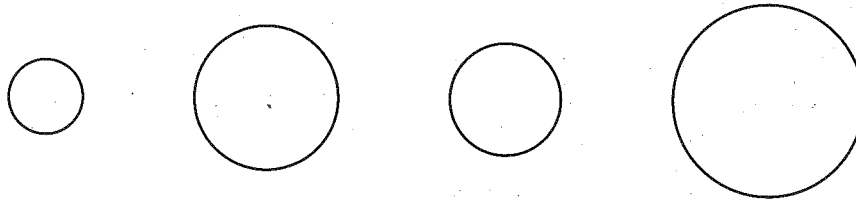
3. Use the graph to answer the questions.

How many sunny days were there? _____

How many cloudy and snowy days were there altogether? _____

Sunny							
Cloudy							
Snowy							

4. Color the largest circle red.
Color the smallest circle blue.



5. Write the number that is one more.

2, _____

17, _____

21, _____