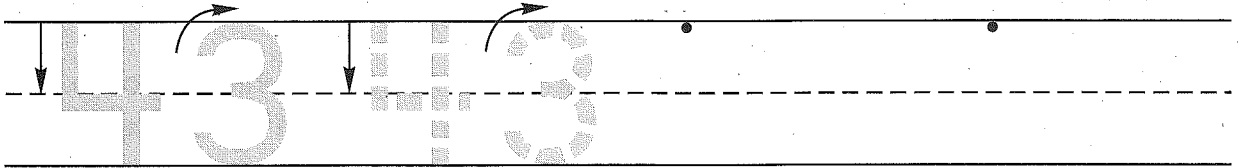


Name _____


Date _____

Day of the Week _____

1. Trace the number forty-three. Write the number forty-three 2 more times.




2. Cory and 4 of his friends hung their coats near the back door. Draw a picture and write a number sentence to show how many coats are hung by the door.



Number sentence _____

How many coats are hung by the door? _____ coats

3. How many dimes do you see? _____ dimes



How much money is this? _____

4. Finish this shape pattern.



5. Write the answers.

$\begin{array}{r} 4 \\ - 1 \\ \hline \end{array}$	$\begin{array}{r} 0 \\ + 3 \\ \hline \end{array}$	$\begin{array}{r} 6 \\ + 6 \\ \hline \end{array}$	$\begin{array}{r} 1 \\ + 5 \\ \hline \end{array}$	$\begin{array}{r} 9 \\ + 0 \\ \hline \end{array}$	$\begin{array}{r} 4 \\ + 4 \\ \hline \end{array}$	$\begin{array}{r} 8 \\ - 1 \\ \hline \end{array}$	$\begin{array}{r} 4 \\ + 1 \\ \hline \end{array}$
---	---	---	---	---	---	---	---

Name _____

1. Circle the number in the box that is between 6 and 12 when you count by 1's.

6 _____ 12




2. David and two of his friends took off their hats when they came into the house. They put their hats on a table by the door. Draw a picture and write a number sentence to show how many hats are on the table.

Number sentence _____

How many hats are on the table? _____ hats

3. How many dimes do you see? _____ dimes



How much money is this? _____

4. Finish this shape pattern.



5. Write the answers.

$\begin{array}{r} 7 \\ - 1 \\ \hline \end{array}$	$\begin{array}{r} 5 \\ + 5 \\ \hline \end{array}$	$\begin{array}{r} 0 \\ + 5 \\ \hline \end{array}$	$\begin{array}{r} 1 \\ + 6 \\ \hline \end{array}$	$\begin{array}{r} 7 \\ + 7 \\ \hline \end{array}$	$\begin{array}{r} 3 \\ - 1 \\ \hline \end{array}$	$\begin{array}{r} 0 \\ + 9 \\ \hline \end{array}$	$\begin{array}{r} 8 \\ + 8 \\ \hline \end{array}$
---	---	---	---	---	---	---	---